

Backwards Bananas

To count back from 50.



Can you fill in the missing numbers? Start with the largest number and count back.
Nora will show you where to begin.



1.

11 12 14 16 18 19 20



2.

18 19 21 23 25 26 27



3.

29 30 32 33 35 37 38



4.

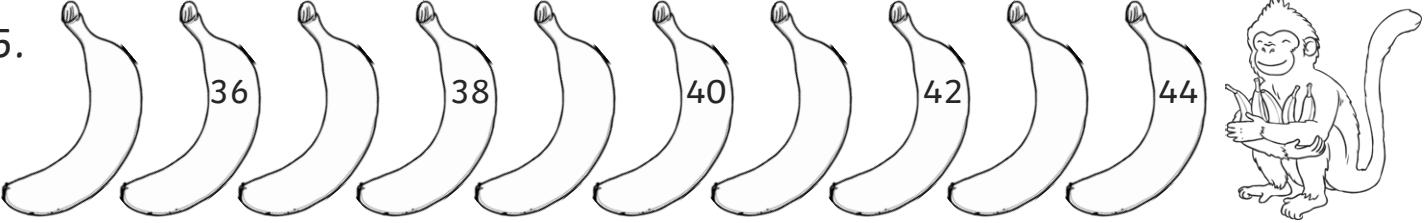
32 34 36 38 40



Backwards Bananas

5.

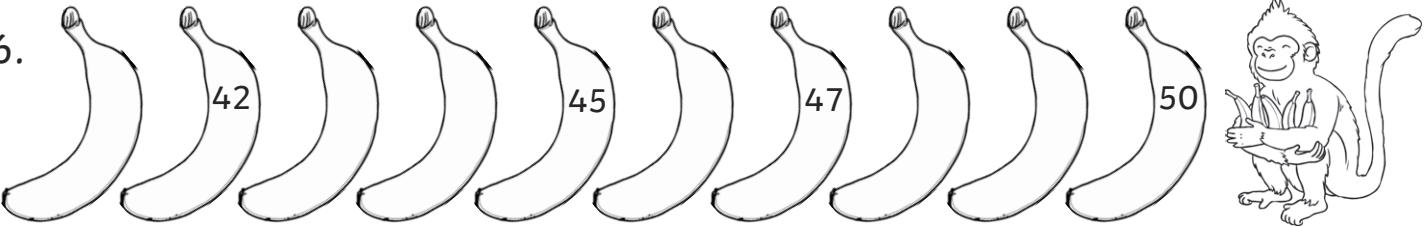
←



A row of ten bananas. The second banana from the left has the number 36, the fourth has 38, the sixth has 40, the eighth has 42, and the tenth has 44. A monkey is sitting on the right side of the row, holding a banana.

6.

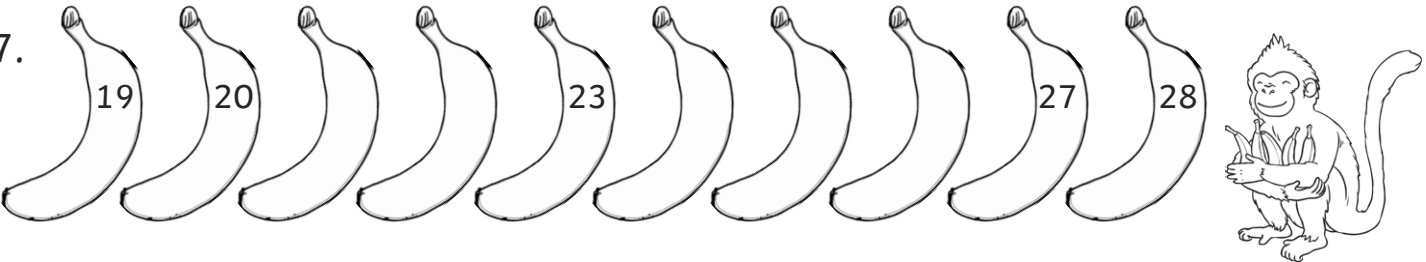
←



A row of ten bananas. The second banana from the left has the number 42, the fifth has 45, the seventh has 47, and the tenth has 50. A monkey is sitting on the right side of the row, holding a banana.

7.

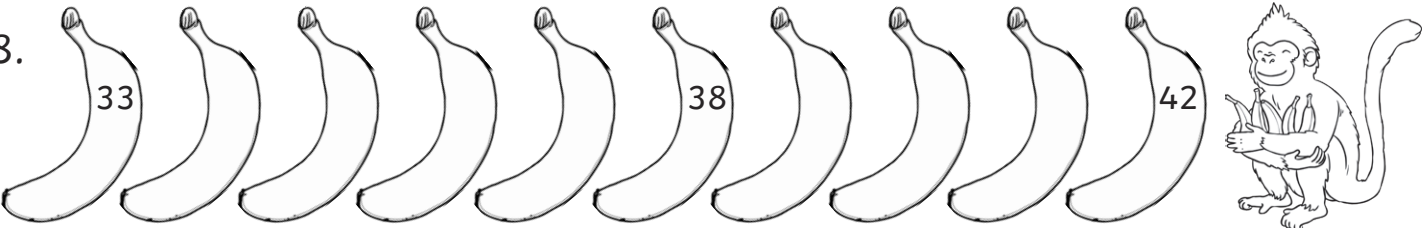
←



A row of ten bananas. The first banana has the number 19, the second has 20, the fifth has 23, the eighth has 27, and the tenth has 28. A monkey is sitting on the right side of the row, holding a banana.

8.

←



A row of ten bananas. The first banana has the number 33, the sixth has 38, and the tenth has 42. A monkey is sitting on the right side of the row, holding a banana.

Answers

1. 11, 12, **13**, 14, **15**, 16, **17**, 18, 19, 20
2. 18, 19, **20**, 21, **22**, 23, **24**, 25, 26, 27
3. 29, 30, **31**, 32, 33, **34**, 35, **36**, 37, 38
4. **31**, 32, **33**, 34, **35**, 36, **37**, 38, **39**, 40
5. **35**, 36, **37**, 38, **39**, 40, **41**, 42, **43**, 44
6. **41**, 42, **43**, **44**, 45, **46**, 47, **48**, **49**, 50
7. 19, 20, **21**, **22**, 23, **24**, **25**, **26**, 27, 28
8. 33, **34**, **35**, **36**, **37**, 38, **39**, **40**, **41**, 42

Backwards Bananas

To count back from 50.



Can you fill in the missing numbers? Start with the largest number and count back.
Nora will show you where to begin.

1.

2.

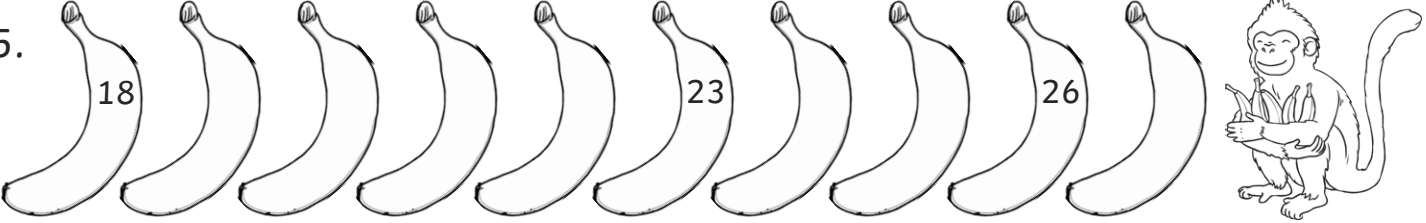
3.

4.

Backwards Bananas

5.

←

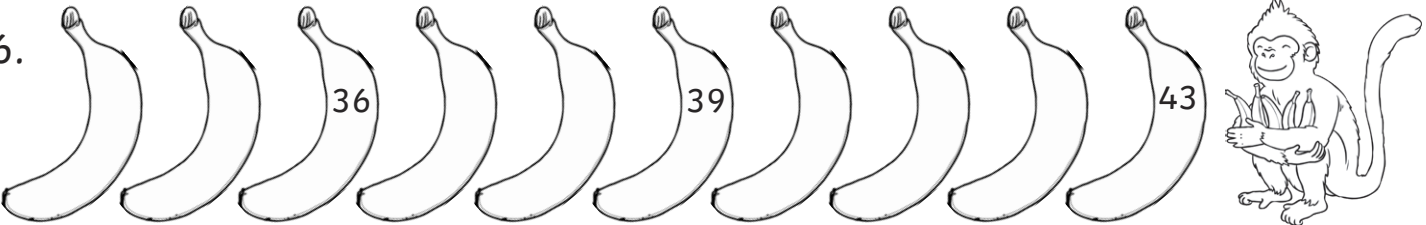


18 23 26

A row of 10 bananas is shown. The first banana has the number 18, the fourth has 23, and the eighth has 26. To the right of the bananas is a cartoon monkey holding a banana. Above the row is a long arrow pointing to the left.

6.

←

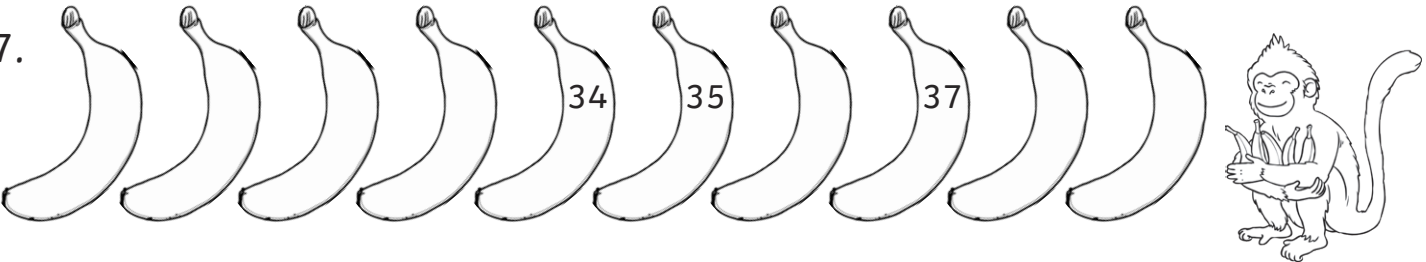


36 39 43

A row of 10 bananas is shown. The third banana has the number 36, the sixth has 39, and the tenth has 43. To the right of the bananas is a cartoon monkey holding a banana. Above the row is a long arrow pointing to the left.

7.

←

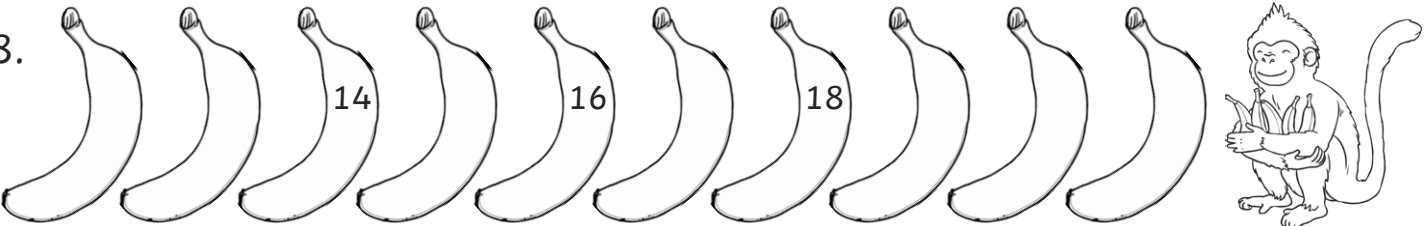


34 35 37

A row of 10 bananas is shown. The fifth banana has the number 34, the sixth has 35, and the eighth has 37. To the right of the bananas is a cartoon monkey holding a banana. Above the row is a long arrow pointing to the left.

8.

←



14 16 18

A row of 10 bananas is shown. The third banana has the number 14, the fifth has 16, and the seventh has 18. To the right of the bananas is a cartoon monkey holding a banana. Above the row is a long arrow pointing to the left.

Answers

1. **15, 16, 17, 18,** 19, **20, 21, 22, 23,** 24
2. **7, 8, 9, 10, 11,** 12, **13, 14, 15,** 16
3. **40,** 41, **42, 43,** 44, **45, 46, 47,** 48, **49**
4. 23, **24, 25, 26,** 27, **28, 29,** 30, **31, 32**
5. 18, **19, 20, 21, 22,** 23, **24, 25,** 26, **27**
6. **34, 35,** 36, **37, 38,** 39, **40, 41, 42,** 43
7. **30, 31, 32, 33,** 34, 35, **36, 37, 38, 39**
8. **12, 13,** 14, **15, 16, 17, 18, 19, 20, 21**

Backwards Bananas

To count back from 50.



Can you fill in the missing numbers? Start with the largest number and count back.
Nora will show you where to begin.



1.

13 16



2.

20 22



3.

21 26



4.

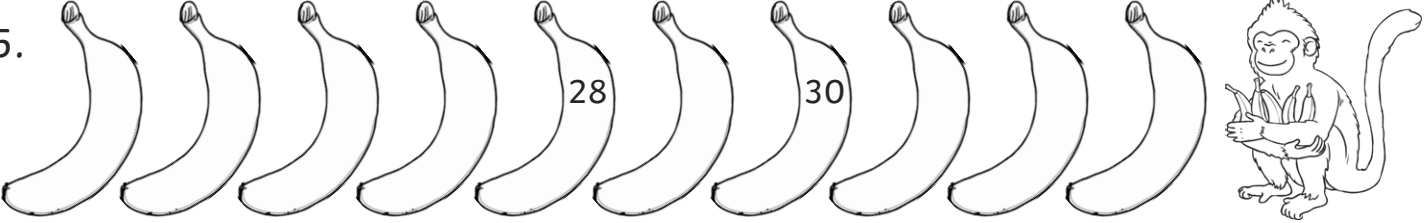
39 44



Backwards Bananas

5.

←

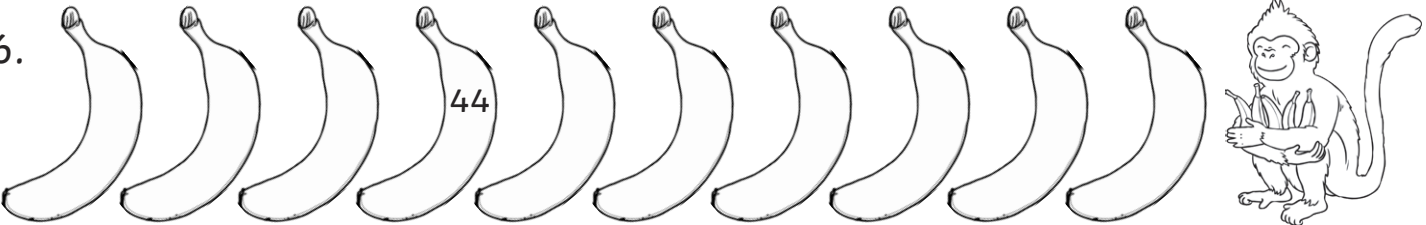


28 30

A monkey sitting on the right, holding a banana.

6.

←

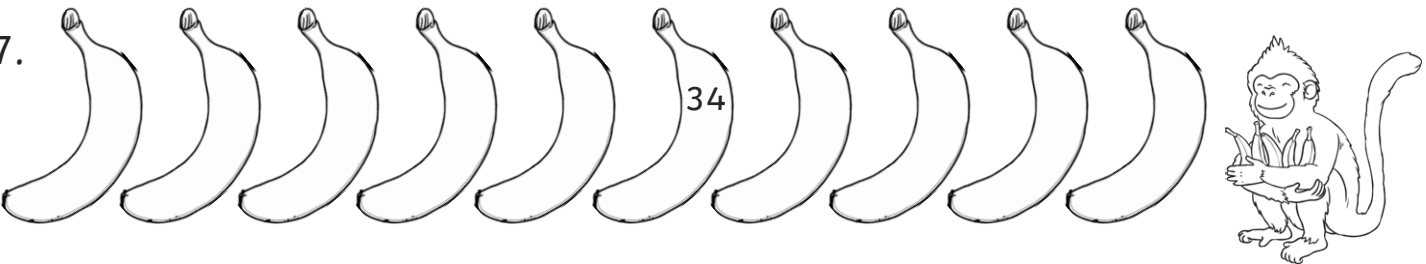


44

A monkey sitting on the right, holding a banana.

7.

←

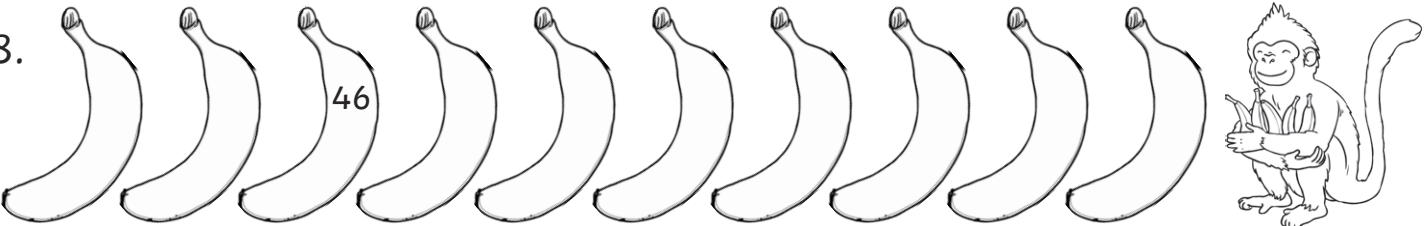


34

A monkey sitting on the right, holding a banana.

8.

←



46

A monkey sitting on the right, holding a banana.

Answers

1. **9, 10, 11, 12, 13, 14, 15, 16, 17, 18**
2. **17, 18, 19, 20, 21, 22, 23, 24, 25, 26**
3. **21, 22, 23, 24, 25, 26, 27, 28, 29, 30**
4. **38, 39, 40, 41, 42, 43, 44, 45, 46, 47**
5. **24, 25, 26, 27, 28, 29, 30, 31, 32, 33**
6. **41, 42, 43, 44, 45, 46, 47, 48, 49, 50**
7. **29, 30, 31, 32, 33, 34, 35, 36, 37, 38**
8. **44, 45, 46, 47, 48, 49, 50, 51, 52, 53**