

Number Facts within 10

To recall and use number facts within 10.



Fact Finders

Draw lines to match the number facts with the totals.

$0 + 3$

$1 + 3$

$0 + 2$

$2 + 3$

$0 + 5$



$1 + 1$

$0 + 1$

$1 + 2$

$0 + 4$

$2 + 2$

$1 + 4$

Finish the number facts to transform the dragon.



$0 + 6$

$0 + 7$

$0 + 8$

$\square + 9$

$0 + \square$

$1 + 5$

$1 + 6$

$\square + 7$

$1 + \square$

$1 + 9$

$2 + \square$

$\square + 5$

$2 + 6$

$2 + \square$

$2 + 8$

$3 + \square$

$\square + 4$

$\square + \square$

$3 + 6$

$\square + \square$

$4 + \square$

$4 + 5$






$4 + \square$

$5 + \square$






Number Facts within 10 Answers

Fact Finders

Draw lines to match the number facts with the totals.

$0 + 3$	$1 + 3$	$0 + 2$	$2 + 3$	$0 + 5$
1 	2 	3 	4 	5 
$1 + 1$	$0 + 1$	$1 + 2$	$0 + 4$	$2 + 2$
$1 + 4$				

Finish the number facts to transform the dragon.

6 	7 	8 	9 	10 
$0 + 6$	$0 + 7$	$0 + 8$	$0 + 9$	$0 + 10$
$1 + 5$	$1 + 6$	$1 + 7$	$1 + 8$	$1 + 9$
$2 + 4$	$2 + 5$	$2 + 6$	$2 + 7$	$2 + 8$
$3 + 3$	$3 + 4$	$3 + 5$	$3 + 6$	$3 + 7$
		$4 + 4$	$4 + 5$	$4 + 6$
				$5 + 5$

Number Facts within 10

To recall and use number facts within 10.

Fact Finders

Find and colour number facts of 6 to make a path from the egg to the bird.

$6 + 1$

$3 + 3$

$0 + 6$

$5 + 1$

$4 + 3$

$1 + 5$

$4 + 2$

$5 + 2$

$2 + 4$

$6 + 0$


$3 + 4$

$5 + 2$

$4 + 4$


$3 + 2$

$5 + 0$



Finish the number facts to transform the dragon.

6



7



8



9



10



$0 + 6$

$0 + 7$

$0 + \square$

$\square + 9$

$0 + \square$

$1 + \square$

$1 + \square$

$\square + 7$

$1 + \square$

$\square + 9$

$\square + \square$

$\square + \square$

$\square + \square$

$\square + \square$

$2 + \square$

Use number facts that you know to solve these subtraction calculations.

$6 - 3 = \square$

$7 - 4 = \square$

$8 - \square = 4$

$9 - 7 = \square$

$10 - \square = 5$

$6 - \square = 0$

$7 - \square = 2$

$8 - 5 = \square$

$9 - \square = 3$

$10 - 6 = \square$

$6 - 4 = \square$

$7 - 0 = \square$

$8 - \square = 7$

$9 - 4 = \square$

$10 - \square = 7$

Number Facts within 10 Answers

Fact Finders

Find and colour number facts of 6 to make a path from the egg to the bird.

$6 + 1$

$3 + 3$

$0 + 6$

$5 + 1$

$4 + 3$

$1 + 5$

$4 + 2$

$5 + 2$

$2 + 4$

$6 + 0$

$3 + 4$

$5 + 2$

$4 + 4$

$3 + 2$

$5 + 0$



$0 + 6$

$0 + 7$

$0 + 8$

$0 + 9$

$0 + 10$

$1 + 5$

$1 + 6$

$1 + 7$

$1 + 8$

$1 + 9$

$2 + 4$
or $3 + 3$

$2 + 5$
or $3 + 4$

$2 + 6$ or
 $3 + 5$ or
 $4 + 4$

$2 + 7$ or
 $3 + 6$ or
 $4 + 5$

$2 + 8$

Use number facts that you know to solve these subtraction calculations.

$6 - 3 = 3$

$7 - 4 = 3$

$8 - 4 = 4$

$9 - 7 = 2$

$10 - 5 = 5$

$6 - 6 = 0$

$7 - 5 = 2$

$8 - 5 = 3$

$9 - 6 = 3$

$10 - 6 = 4$

$6 - 4 = 2$

$7 - 0 = 7$

$8 - 1 = 7$

$9 - 4 = 5$

$10 - 3 = 7$

Number Facts within 10

To recall and use number facts within 10.

Fact Finders

Find and colour number facts of 9 to make a path from the egg to the bird.

$2 + 7$	$6 + 3$	$4 + 4$	$5 + 5$	$9 + 1$
$5 + 3$	$9 + 0$	$6 + 2$	$1 + 8$	$4 + 5$
$4 + 6$	$8 + 1$	$7 + 3$	$3 + 6$	$2 + 8$
$1 + 9$	$5 + 4$	$0 + 9$	$7 + 2$	$4 + 3$

Finish the number facts to transform the dragon.



$0 + \square$

$0 + \square$

$\square + 8$

$0 + \square$

$\square + \square$

$1 + \square$

$1 + \square$

$1 + \square$

$\square + 8$

$\square + \square$

$2 + \square$

$2 + \square$

$\square + \square$

$\square + \square$

$\square + \square$

Use number facts that you know to solve these subtraction calculations.

$6 - \square = 3$

$7 - 4 = \square$

$8 - \square = 1$

$9 - \square = 6$

$10 - \square = 5$

$6 - 5 = \square$

$7 - \square = 2$

$8 - 3 = \square$

$9 - 7 = \square$

$10 - 2 = \square$

$6 - \square = 2$

$7 - 6 = \square$

$8 - \square = 2$


$9 - \square = 5$


$10 - \square = 3$

Number Facts within 10 Answers

Fact Finders

Find and colour number facts of 9 to make a path from the egg to the bird.

	$2 + 7$	$6 + 3$	$4 + 4$	$5 + 5$	$9 + 1$
	$5 + 3$	$9 + 0$	$6 + 2$	$1 + 8$	$4 + 5$
	$4 + 6$	$8 + 1$	$7 + 3$	$3 + 6$	$2 + 8$
	$1 + 9$	$5 + 4$	$0 + 9$	$7 + 2$	$4 + 3$



Finish the number facts to transform the dragon.

6 

7 

8 

9 

10 

$0 + \boxed{6}$

$0 + \boxed{7}$

$\boxed{0} + 8$

$0 + \boxed{9}$

$1 + \boxed{5}$

$1 + \boxed{6}$

$1 + \boxed{7}$

$\boxed{1} + 8$

$2 + \boxed{4}$

$2 + \boxed{5}$

$2 + 6$ or
 $3 + 5$ or
 $4 + 4$

$2 + 7$ or
 $3 + 6$ or
 $4 + 5$

Any three from:

$0 + 10$

$1 + 9$

$2 + 8$

$3 + 7$

$4 + 6$

$5 + 5$

Use number facts that you know to solve these subtraction calculations.

$6 - \boxed{3} = 3$

$7 - 4 = \boxed{3}$

$8 - \boxed{7} = 1$

$9 - \boxed{3} = 6$

$10 - \boxed{5} = 5$

$6 - 5 = \boxed{1}$

$7 - \boxed{5} = 2$

$8 - 3 = \boxed{5}$

$9 - 7 = \boxed{2}$

$10 - 2 = \boxed{8}$

$6 - \boxed{4} = 2$

$7 - 6 = \boxed{1}$

$8 - \boxed{6} = 2$

$9 - \boxed{4} = 5$

$10 - \boxed{7} = 3$