


Starfish

To find and recall number bonds of 5 and 6.



Aisha and Alec have caught 6 starfish altogether. How many starfish might they put in each bucket?

Put the starfish in the buckets then draw what you have done.



Aisha



Alec





Aisha



Alec





and




and




and



and




and




and



and









Alec

Starfish **Answers**

0 and 6

1 and 5

2 and 4

3 and 3

4 and 2

5 and 1

6 and 0


The bottom 3 are duplicates so there are 4 different ways to make 6.

Starfish

To find and recall number bonds of 5 and 6.



Aisha and Alec have caught 6 starfish altogether. How many starfish might they put in each bucket? Can you find all the possibilities?



Aisha




Alec




Aisha




Alec




and




and




and




and



and



and



and



Starfish **Answers**

0 and 6

1 and 5

2 and 4

3 and 3

4 and 2

5 and 1

6 and 0


The bottom 3 are duplicates so there are 4 different ways to make 6.

Starfish

To find and recall number bonds of 5 and 6.



Aisha and Alec have caught 6 starfish altogether. How many starfish might they put in each bucket? Can you find all the possibilities? Can you explain how you know you have found them all?



Aisha



Alec


Which are the same?
How many different combinations are there?



Aisha




Alec




and





and



and




and



and



and



and



Starfish **Answers**

0 and 6

1 and 5

2 and 4

3 and 3

4 and 2

5 and 1

6 and 0

The bottom 3 are duplicates so there are 4 different ways to make 6.