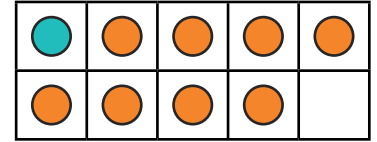

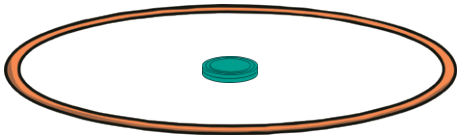


# Represent It

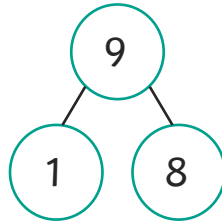
To find and recall number bonds of 9.



Choose a way to represent the number bonds of 9.



9	
1	8



$$1 + 8 = 9$$

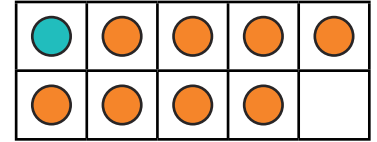

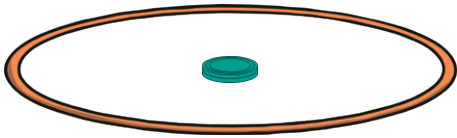
Can you find all of the number bonds?

# Represent It

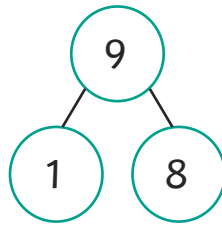
To find and recall number bonds of 9.



Choose at least 2 different ways to represent the number bonds of 9.



9	
1	8



$$1 + 8 = 9$$

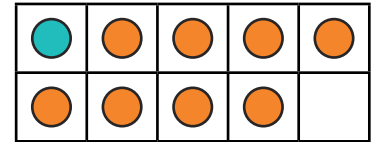

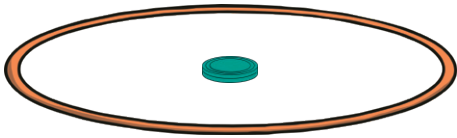
Can you find all of the number bonds?

# Represent It

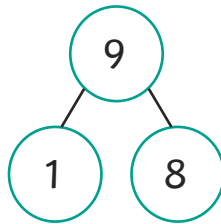
To find and recall number bonds of 9.



Choose different ways to represent the number bonds of 9.



9	
1	8



$$1 + 8 = 9$$

Can you find all of the number bonds?

How can you prove that you have found all of the possibilities?

---

---

---

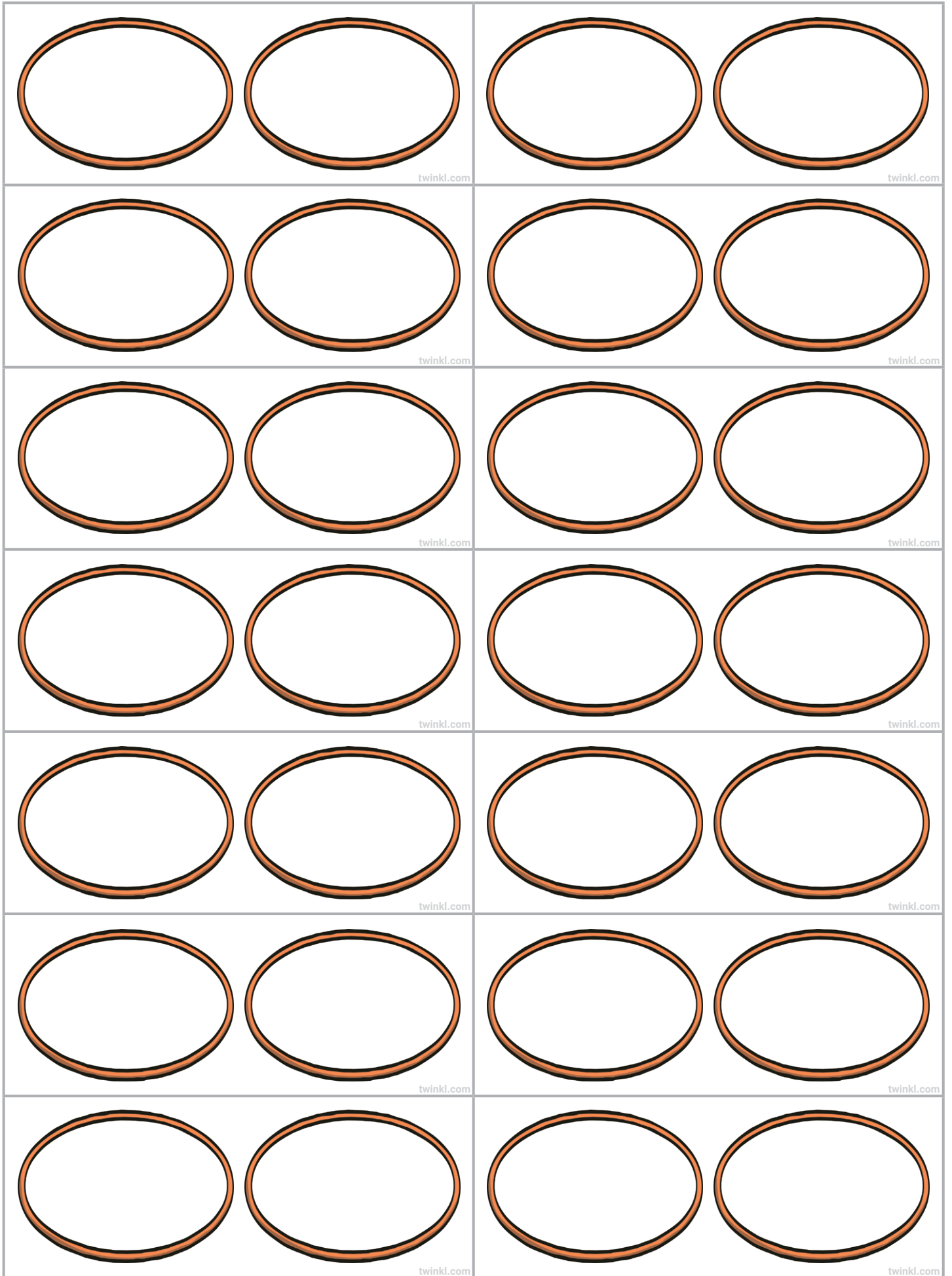
# Represent It Answers

Children have chosen their preferred representations to investigate number bonds of nine.















$0 + 9$	$1 + 8$	$2 + 7$	$3 + 6$	$4 + 5$
$5 + 4$	$6 + 3$	$7 + 2$	$8 + 1$	$9 + 0$

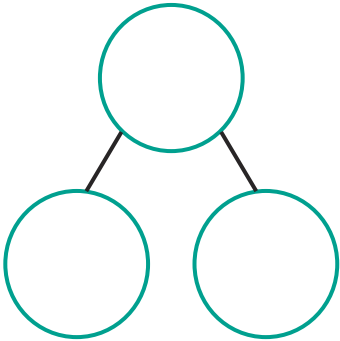
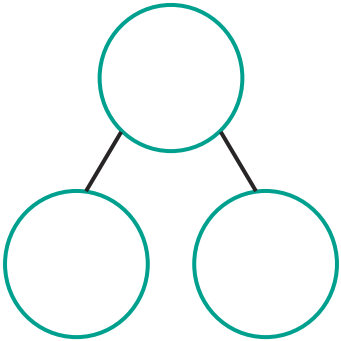
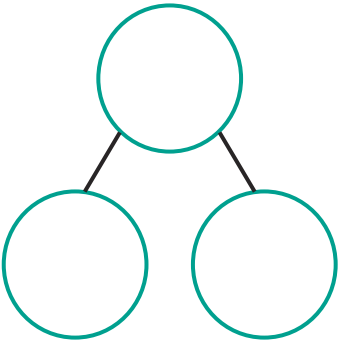
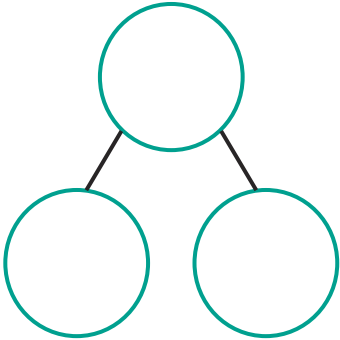
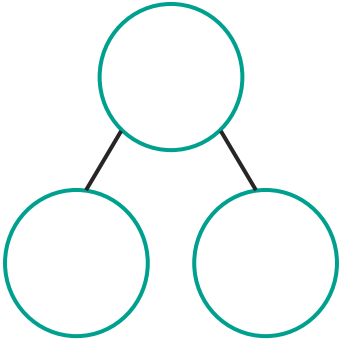
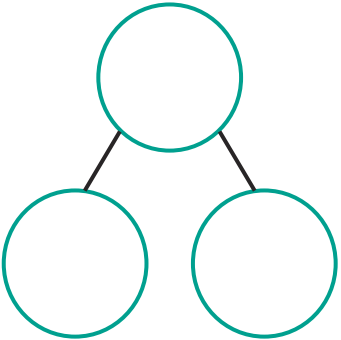
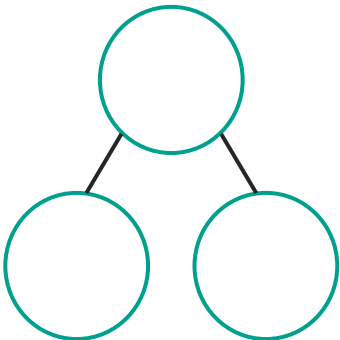
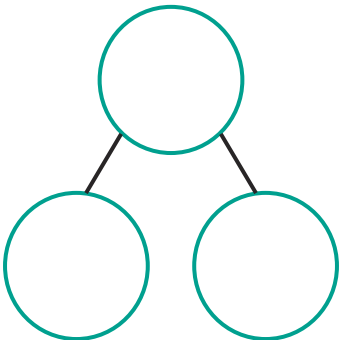
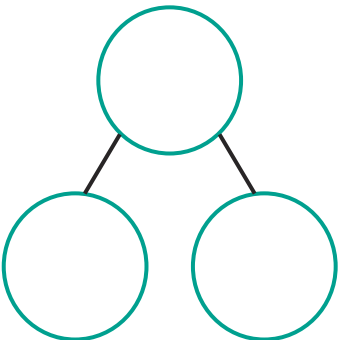
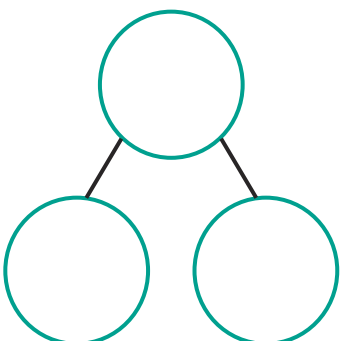
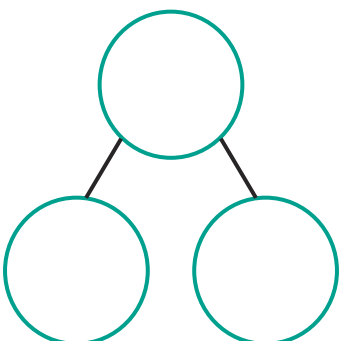
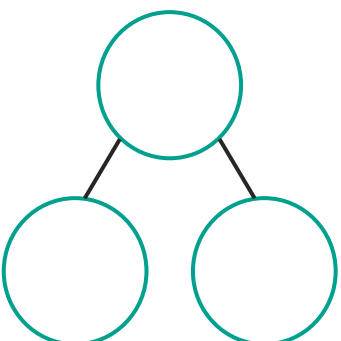
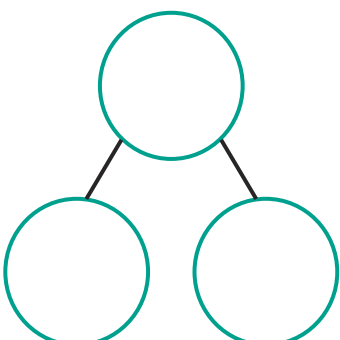
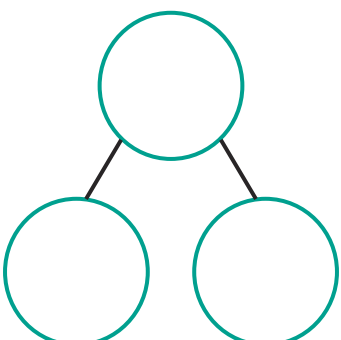
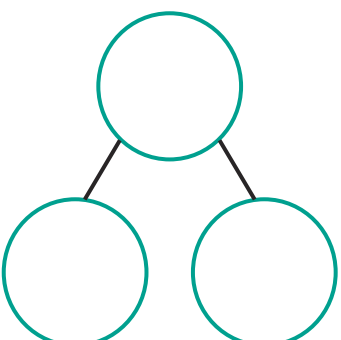
There are ten possibilities, five of which are different.

Children may work systematically, following a number pattern to ensure that they have found all possibilities.



<table border="1"><tr><td></td><td></td><td></td><td></td><td></td></tr><tr><td></td><td></td><td></td><td></td><td></td></tr></table> <p>twinkl.com</p>											<table border="1"><tr><td></td><td></td><td></td><td></td><td></td></tr><tr><td></td><td></td><td></td><td></td><td></td></tr></table> <p>twinkl.com</p>										
<table border="1"><tr><td></td><td></td><td></td><td></td><td></td></tr><tr><td></td><td></td><td></td><td></td><td></td></tr></table> <p>twinkl.com</p>											<table border="1"><tr><td></td><td></td><td></td><td></td><td></td></tr><tr><td></td><td></td><td></td><td></td><td></td></tr></table> <p>twinkl.com</p>										
<table border="1"><tr><td></td><td></td><td></td><td></td><td></td></tr><tr><td></td><td></td><td></td><td></td><td></td></tr></table> <p>twinkl.com</p>											<table border="1"><tr><td></td><td></td><td></td><td></td><td></td></tr><tr><td></td><td></td><td></td><td></td><td></td></tr></table> <p>twinkl.com</p>										
<table border="1"><tr><td></td><td></td><td></td><td></td><td></td></tr><tr><td></td><td></td><td></td><td></td><td></td></tr></table> <p>twinkl.com</p>											<table border="1"><tr><td></td><td></td><td></td><td></td><td></td></tr><tr><td></td><td></td><td></td><td></td><td></td></tr></table> <p>twinkl.com</p>										
<table border="1"><tr><td></td><td></td><td></td><td></td><td></td></tr><tr><td></td><td></td><td></td><td></td><td></td></tr></table> <p>twinkl.com</p>											<table border="1"><tr><td></td><td></td><td></td><td></td><td></td></tr><tr><td></td><td></td><td></td><td></td><td></td></tr></table> <p>twinkl.com</p>										
<table border="1"><tr><td></td><td></td><td></td><td></td><td></td></tr><tr><td></td><td></td><td></td><td></td><td></td></tr></table> <p>twinkl.com</p>											<table border="1"><tr><td></td><td></td><td></td><td></td><td></td></tr><tr><td></td><td></td><td></td><td></td><td></td></tr></table> <p>twinkl.com</p>										
<table border="1"><tr><td></td><td></td><td></td><td></td><td></td></tr><tr><td></td><td></td><td></td><td></td><td></td></tr></table> <p>twinkl.com</p>											<table border="1"><tr><td></td><td></td><td></td><td></td><td></td></tr><tr><td></td><td></td><td></td><td></td><td></td></tr></table> <p>twinkl.com</p>										
<table border="1"><tr><td></td><td></td><td></td><td></td><td></td></tr><tr><td></td><td></td><td></td><td></td><td></td></tr></table> <p>twinkl.com</p>											<table border="1"><tr><td></td><td></td><td></td><td></td><td></td></tr><tr><td></td><td></td><td></td><td></td><td></td></tr></table> <p>twinkl.com</p>										

 twinkl.com	 twinkl.com
 twinkl.com	 twinkl.com
 twinkl.com	 twinkl.com
 twinkl.com	 twinkl.com
 twinkl.com	 twinkl.com
 twinkl.com	 twinkl.com
 twinkl.com	 twinkl.com

 twinkl.com	 twinkl.com	 twinkl.com
 twinkl.com	 twinkl.com	 twinkl.com
 twinkl.com	 twinkl.com	 twinkl.com
 twinkl.com	 twinkl.com	 twinkl.com
 twinkl.com	 twinkl.com	 twinkl.com



$$\square + \square = 9$$

twinkl.com

$$9 = \square + \square$$

twinkl.com

$$\square + \square = 9$$

twinkl.com

$$9 = \square + \square$$

twinkl.com

$$\square + \square = 9$$

twinkl.com

$$9 = \square + \square$$

twinkl.com

$$\square + \square = 9$$

twinkl.com

$$9 = \square + \square$$

twinkl.com

$$\square + \square = 9$$

twinkl.com

$$9 = \square + \square$$

twinkl.com

$$\square + \square = 9$$

twinkl.com

$$9 = \square + \square$$

twinkl.com

$$\square + \square = 9$$

twinkl.com

$$9 = \square + \square$$

twinkl.com

$$\square + \square = 9$$

twinkl.com

$$9 = \square + \square$$

twinkl.com

$$\square + \square = 9$$

twinkl.com

$$9 = \square + \square$$

twinkl.com

$$\square + \square = 9$$

twinkl.com

$$9 = \square + \square$$

twinkl.com