

1 Complete the subtractions.

a)

		7	3	1	5	
	-	2	1	0	4	

c)

		7	3	1	5	
	-	3	2	4	1	

b)

		7	3	1	5	
	-	5	4	2	0	

2 Complete the calculations.

a)

		8	4	3	4	
	-	2	1	0	4	

c)

		4	6	8	3	2
	-	1	9	0	2	4

b)

		£	8	8	2	0	0
	-	£		6	1	0	0

d)

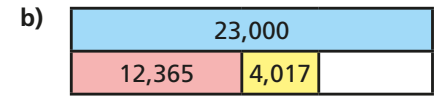
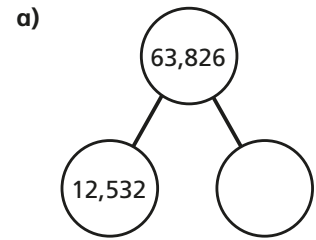
		3	4	5	2	0
	-			6	7	9

3 A family has £22,658 in the bank.
They spend £3,600 on a holiday.
How much money do they have left?



4 It is 10,553 miles from London to Sydney.
It is 9,929 miles from New York to Sydney.
How much further away is Sydney from London than from New York?

5 Complete the models.



6 Mr Hall has written these subtractions on the board.

$$45,541 - 25,865$$

$$68,945 - 34,758$$

Rosie's workings

	2	5	8	6	5
-	4	5	5	4	1
	2	0	3	2	4

Whitney's workings

	6	8	9	4	5
-	3	4	7	5	8
	3	4	2	1	3

Explain the mistakes that Rosie and Whitney have made.

7 Complete the subtractions.

a) $10,004 - 9,995$

b) $10,000 - 6,727$

c) $15,923 - 9,998$

How did you work this out?

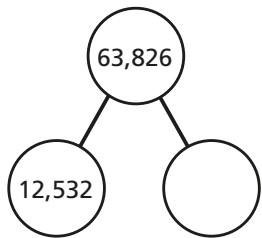
Is there another method you could use?



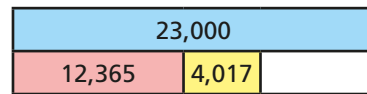
- 4 It is 10,553 miles from London to Sydney.
It is 9,929 miles from New York to Sydney.
How much further away is Sydney from London than from New York?

- 5 Complete the models.

a)



b)



- 6 Mr Hall has written these subtractions on the board.

$$45,541 - 25,865$$

Rosie's workings

2	5	8	6	5
-	4	5	4	1
<hr/>				
2	0	3	2	4

$$68,945 - 34,758$$

Whitney's workings

6	8	9	4	5
-	3	4	7	8
<hr/>				
3	4	2	1	3

Explain the mistakes that Rosie and Whitney have made.

- 7 Complete the subtractions.

a) $10,004 - 9,995$ b) $10,000 - 6,727$ c) $15,923 - 9,998$

How did you work this out?

Is there another method you could use?

- 8 Teddy and Jack are playing a computer game.

Teddy scores 55,890 points.

Jack scores 36,475 points fewer than Teddy.

- a) How many points does Jack score?
b) How many points do they have altogether?

- 9 Here are some digit cards.



Ron makes a 4-digit number with the cards.

Eva makes a 4-digit number with the cards.

The difference between their numbers is between 1,000 and 3,000

What numbers could Ron and Eva have made?

