


1

$$3,257 \times 4 = 13,024$$

I know this is wrong by looking at the ones digit.



Is Eva correct? Talk about it with a partner.

2

Complete the multiplications.

a)

	1	2	3	5	
x			5	3	
<hr/>					
<hr/>					
<hr/>					

b)

	4	0	3	6	
x			2	4	
<hr/>					
<hr/>					
<hr/>					

c)

	6	9	7	8	
x			7	6	
<hr/>					
<hr/>					
<hr/>					

3

Write the correct multiplications to complete the calculations.

$$1,247 \times 37$$

$$2,031 \times 29$$

$$2,413 \times 23$$

x					
	7	2	3	9	
	4	8	2	6	0
<hr/>					
<hr/>					
<hr/>					

x					
	8	7	2	9	
	3	7	4	1	0
<hr/>					
<hr/>					
<hr/>					

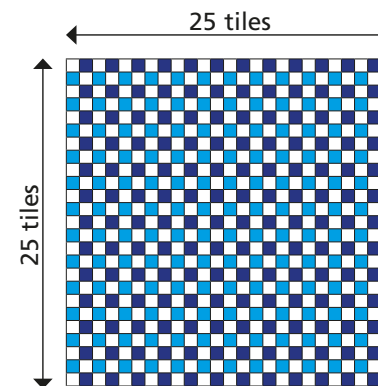
x					
	1	8	2	7	9
	4	0	6	2	0
<hr/>					
<hr/>					
<hr/>					

4

A car park has 230 rows of 17 spaces. There are 1,250 cars already parked. How many empty spaces are there?

5

Mr Smith has tiled his kitchen floor.



Each tile costs 18p.

How much does it cost to tile the floor?

6

1

2

3

6

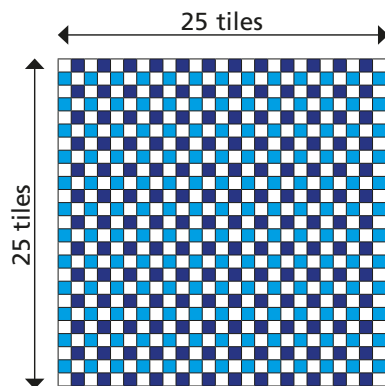
5

Using the digit cards, what is the greatest 3-digit by 2-digit product you can make that is also an odd number?



- 4 A car park has 230 rows of 17 spaces. There are 1,250 cars already parked. How many empty spaces are there?

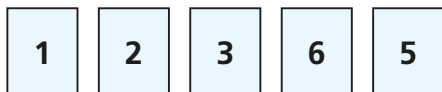
- 5 Mr Smith has tiled his kitchen floor.



Each tile costs 18p.

How much does it cost to tile the floor?

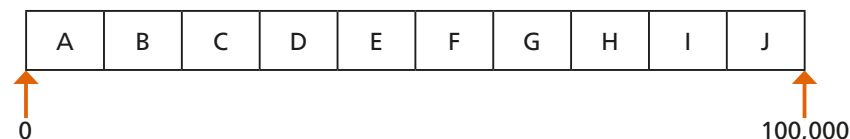
- 6



Using the digit cards, what is the greatest 3-digit by 2-digit product you can make that is also an odd number?

- 7 Rosie does 37 sit-ups every day for a year. Annie does 370 sit-ups every day in July. Who does more sit-ups and by how many?

- 8 This is an activity for two players. You will need two different coloured pens or pencils – one for each player.



Use any five different digits to complete the multiplication.

$$\square \square \square \times \square \square = \square \square \square \square$$

Which letter interval does your answer lie in?

Shade the section on the track above.

Take it in turns with a partner to repeat the steps above.

The winner is the first person to shade three sections in a row.

