

High Score

To add two 2-digit numbers by adding the ones (crossing 10) and the tens.




Add the scores to find the total.

$$16 + 15 = \square$$

$$10 + 10 = \square$$

$$6 + 5 = \square$$

$$\square + \square = \square$$



Tens	Ones		
10	1	1	1
	1	1	1
10	1	1	1
	1	1	

$$\begin{array}{c} 17 \\ \swarrow \quad \searrow \\ 10 \quad 7 \end{array} + \begin{array}{c} 16 \\ \swarrow \quad \searrow \\ 10 \quad 6 \end{array} = \square$$

$$10 + 10 = \square$$

$$7 + 6 = \square$$


$$\square + \square = \square$$

$$18 + 25 = \square$$

Tens $\square + \square = \square$

Ones $\square + \square = \square$

Total $\square + \square = \square$



Tens	Ones			
10	1	1	1	1
	1	1	1	1
10	10			
	1			

$$\begin{array}{c} 27 \\ \swarrow \quad \searrow \\ 20 \quad 7 \end{array} + \begin{array}{c} 26 \\ \swarrow \quad \searrow \\ 20 \quad 6 \end{array} = \square$$

Tens $\square + \square = \square$

Ones $\square + \square = \square$

Total $\square + \square = \square$

High Score Answers

Add the scores to find the total.

$$16 + 15 = \boxed{31}$$

$$10 + 10 = \boxed{20}$$

$$6 + 5 = \boxed{11}$$

$$\boxed{20} + \boxed{11} = \boxed{31}$$

Tens	Ones		
(10)	(1)	(1)	(1)
	(1)	(1)	(1)
(10)	(1)	(1)	(1)
	(1)	(1)	

$$\begin{array}{c} 17 \\ / \quad \backslash \\ \boxed{10} \quad \boxed{7} \end{array} + \begin{array}{c} 16 \\ / \quad \backslash \\ \boxed{10} \quad \boxed{6} \end{array} = \boxed{33}$$

$$10 + 10 = \boxed{20}$$

$$7 + 6 = \boxed{13}$$

$$\boxed{20} + \boxed{13} = \boxed{33}$$

$$18 + 25 = \boxed{43}$$

$$\boxed{10} + \boxed{20} = \boxed{30}$$

$$\boxed{8} + \boxed{5} = \boxed{13}$$

$$\boxed{30} + \boxed{13} = \boxed{43}$$

Tens	Ones			
(10)	(1)	(1)	(1)	(1)
	(1)	(1)	(1)	(1)
(10) (10)	(1)	(1)	(1)	(1)
	(1)			

$$\begin{array}{c} 27 \\ / \quad \backslash \\ \boxed{20} \quad \boxed{7} \end{array} + \begin{array}{c} 26 \\ / \quad \backslash \\ \boxed{20} \quad \boxed{6} \end{array} = \boxed{53}$$

$$\boxed{20} + \boxed{20} = \boxed{40}$$

$$\boxed{7} + \boxed{6} = \boxed{13}$$

$$\boxed{40} + \boxed{13} = \boxed{53}$$

High Score

To add two 2-digit numbers by adding the ones (crossing 10) and the tens.



Add the scores to find the total.


Complete the place value grid and part-whole model.

$$28 + 15 = \square$$

Tens $\square + \square = \square$

Ones $\square + \square = \square$

Total $\square + \square = \square$



Tens	Ones
(10) (10)	(1) (1) (1) (1)
	(1) (1) (1) (1)
(10)	(1) (1) (1) (1)
	(1)

$$\begin{array}{c} 37 \\ \swarrow \searrow \\ 30 \quad 7 \end{array} + \begin{array}{c} 26 \\ \swarrow \searrow \\ 20 \quad 6 \end{array} = \square$$

Tens $\square + \square = \square$

Ones $\square + \square = \square$


Total $\square + \square = \square$

$$18 + 35 = \square$$

Tens $\square + \square = \square$

Ones $\square + \square = \square$

Total $\square + \square = \square$



Tens	Ones

$$\begin{array}{c} 47 \\ \swarrow \searrow \\ \square \quad \square \end{array} + \begin{array}{c} 25 \\ \swarrow \searrow \\ \square \quad \square \end{array} = \square$$

Tens $\square + \square = \square$

Ones $\square + \square = \square$

Total $\square + \square = \square$

High Score Answers

Add the scores to find the total.

Complete the place value grid and part-whole model.

$$28 + 15 = 43$$

$$\boxed{20} + \boxed{10} = \boxed{30}$$

$$\boxed{8} + \boxed{5} = \boxed{13}$$

$$\boxed{30} + \boxed{13} = \boxed{43}$$

Tens	Ones
(10) (10)	(1) (1) (1) (1)
	(1) (1) (1) (1)
(10)	(1) (1) (1) (1)
	(1)

$$\begin{array}{c} 37 \\ \swarrow \searrow \\ \boxed{30} \quad \boxed{7} \end{array} + \begin{array}{c} 26 \\ \swarrow \searrow \\ \boxed{20} \quad \boxed{6} \end{array} = \boxed{63}$$

$$\boxed{30} + \boxed{20} = \boxed{50}$$

$$\boxed{7} + \boxed{6} = \boxed{13}$$

$$\boxed{50} + \boxed{13} = \boxed{63}$$

$$18 + 35 = 53$$

$$\boxed{10} + \boxed{30} = \boxed{40}$$

$$\boxed{8} + \boxed{5} = \boxed{13}$$

$$\boxed{40} + \boxed{13} = \boxed{53}$$

Tens	Ones
(10)	(1) (1) (1) (1)
	(1) (1) (1) (1)
(10) (10) (10)	(1) (1) (1) (1)
	(1)

$$\begin{array}{c} 47 \\ \swarrow \searrow \\ \boxed{40} \quad \boxed{7} \end{array} + \begin{array}{c} 25 \\ \swarrow \searrow \\ \boxed{20} \quad \boxed{5} \end{array} = \boxed{72}$$

$$\boxed{40} + \boxed{20} = \boxed{60}$$

$$\boxed{7} + \boxed{5} = \boxed{12}$$

$$\boxed{60} + \boxed{12} = \boxed{72}$$

High Score

To add two 2-digit numbers by adding the ones (crossing 10) and the tens.



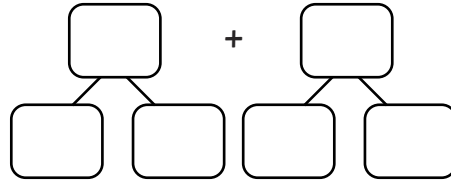
Add the scores to find the total. Use a place value grid or part-whole models to help.

$53 + 29 =$

Tens + =

Ones + =

Total + =

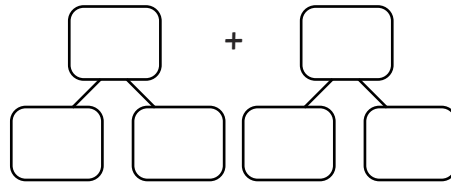


$61 + 29 =$

Tens + =

Ones + =

Total + =



$19 + 49 =$

$32 + 27 =$

High Score Answers

Add the scores to find the total. Use a place value grid or part-whole models to help.

$$53 + 29 = \mathbf{82}$$

$$61 + 29 = \mathbf{90}$$

$$19 + 49 = \mathbf{68}$$

$$32 + 27 = \mathbf{53}$$