

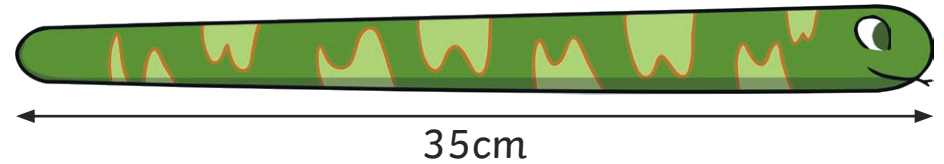
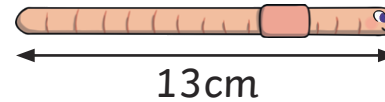
Length and Height Addition and Subtraction Challenges



Length and Height Addition and Subtraction Challenges




How much longer is the snake than the worm?



Length and Height Addition and Subtraction Challenges



The apple tree is double the height of the pear tree. How tall is the apple tree?



Length and Height Addition and Subtraction Challenges



How much snail trail was left in the garden in total over the weekend?

Saturday = 21cm snail trail



Sunday = 34cm snail trail






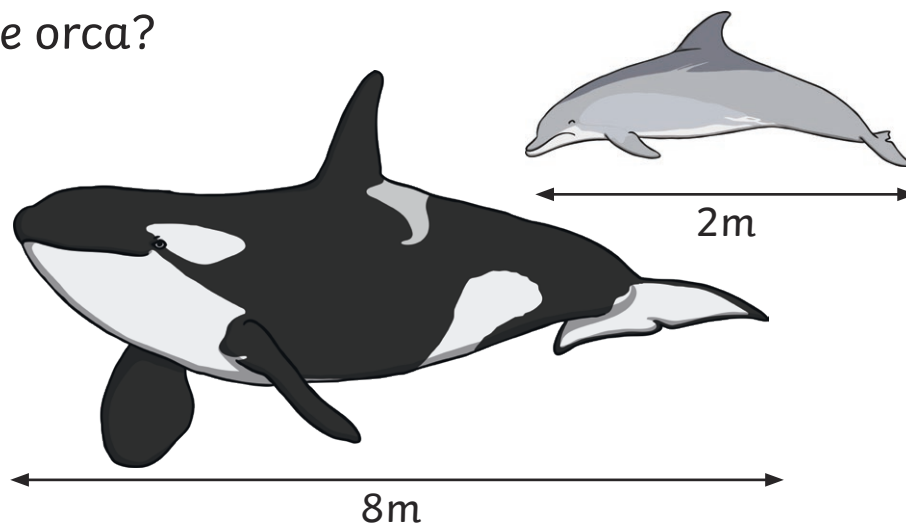
First, the flower was 12cm tall.

Then, it grew by 15cm.


How tall is the flower now?



How much shorter is the dolphin than the orca?



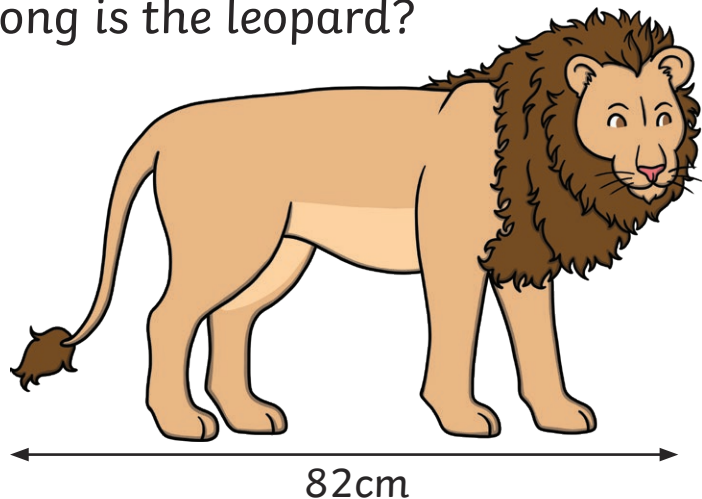
What is the difference between the height of the birds?



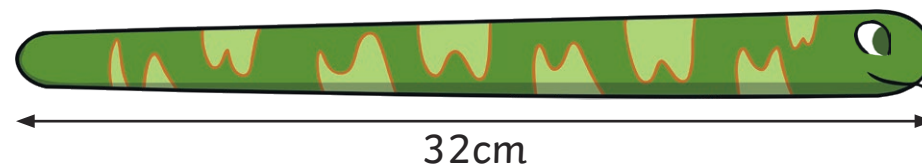
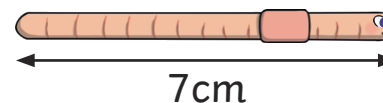
The bush was 78cm tall. I chopped off 35cm. How tall is the bush now?



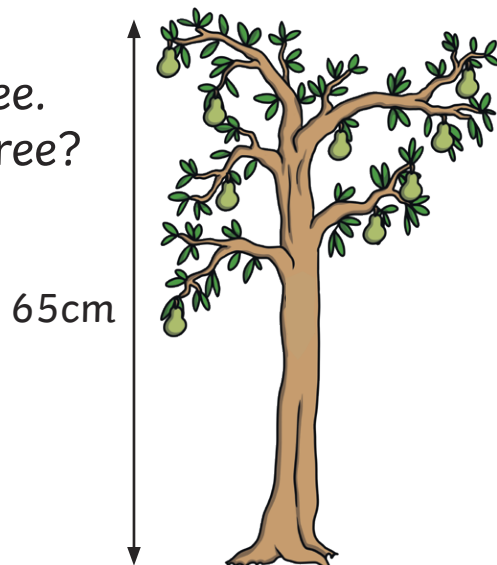
The leopard is 38cm shorter than the lion.
How long is the leopard?



How much longer is the snake than
the worm?



The apple tree is 17cm
taller than the pear tree.
How tall is the apple tree?

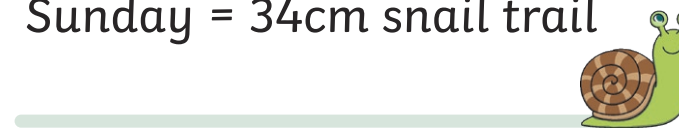


How much snail trail was left in the
garden in total over the weekend?

Saturday = 49cm snail trail




Sunday = 34cm snail trail

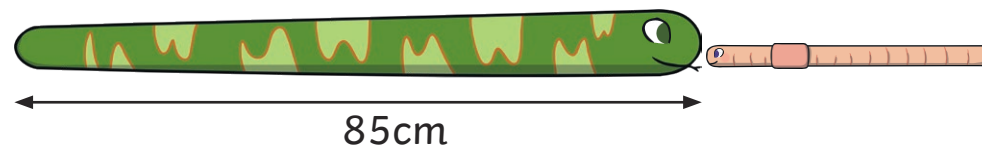


First, the sunflower was 68cm tall.
Then, it grew by 5cm on Saturday
and 7cm on Sunday.



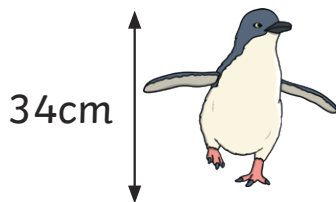

How tall is the flower now?



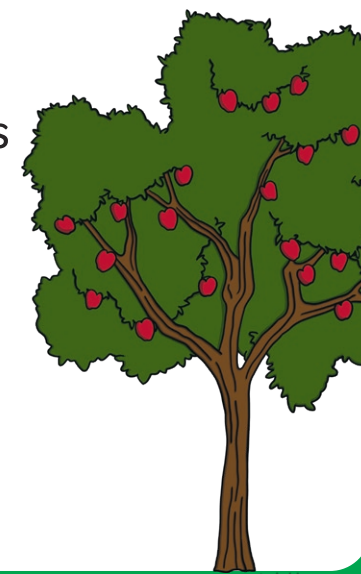
The worm is 73cm shorter than the snake.
What is the total length of the worm and
the snake?



What is taller, a penguin on top of a seal
or a rabbit on top of a cow?



The tree was 98cm tall.
30cm was chopped off on
Saturday and then 15cm was
chopped off on Sunday.
How tall is the tree now?





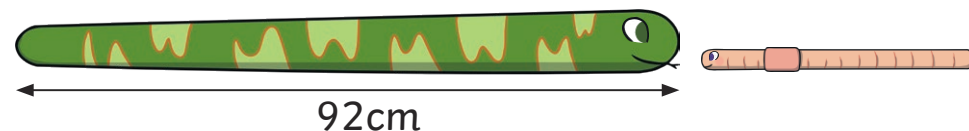
Whose is the tallest flower?

Dina's was 23cm, then grew by 19cm.



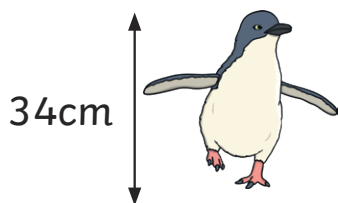

Jing's was 17cm, then grew by 28cm.



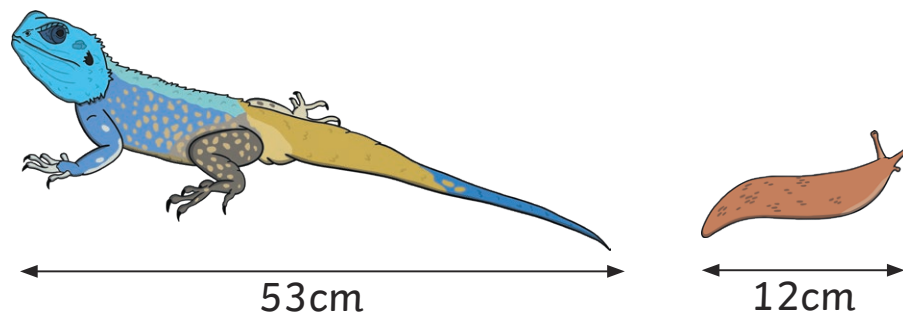
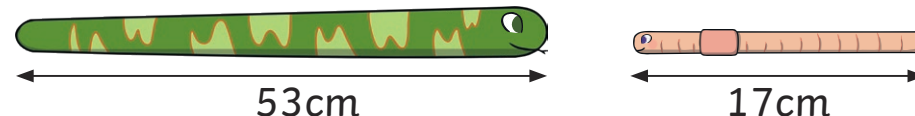
The worm is 88cm shorter than the snake. What is the total length of the snake and the worm?



What is the difference between the tallest and shortest animal?



Which is longer, a worm lined up next to a snake or a lizard lined up next to a slug?





The flower was 28cm tall.

On Monday, the flower grew by 12cm.

On Tuesday, the flower wilted and shrunk by 7cm.

How tall is the flower now?




Last week the snake grew 13cm.


This week it grew 22cm.

The snake is now 48cm long.

How long was it to start with?

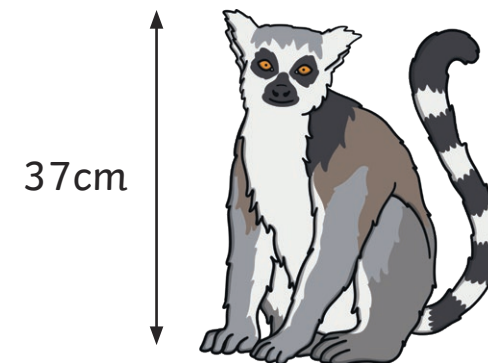


The flower is 12cm tall. If it grows by 13cm tomorrow and then grows the same again the next day, how tall will it be?



The koala is 22cm taller than this lemur.

What is the total height of the koala and the lemur?



Length and Height Addition and Subtraction Challenges



1. 22cm
2. 4m
3. 55cm
4. 27cm
5. 6m
6. 31cm
7. 43cm

twinkl.com

Length and Height Addition and Subtraction Challenges



1. 44cm
2. 25cm
3. 82cm
4. 83cm
5. 80cm
6. 97cm
7. A rabbit on top of a cow is 90cm and a penguin of top of a seal is 81cm. The rabbit on top of a cow is taller.
8. 53cm

twinkl.com

Length and Height Addition and Subtraction Challenges



1. Dina's flower is 42cm tall. Jing's flower is 45cm tall. Jing's flower is the tallest.
2. 96cm
3. 66cm
4. The worm and the snake are 70cm long. The lizard and the slug are 65cm long. The worm and the snake are longer.
5. 33cm
6. 13cm
7. 38cm
8. 96cm

twinkl.com