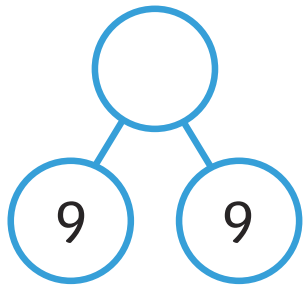


Doubles



Fill in the missing numbers.



$$\square + 6 = 12$$

$$2 \times 12 = \square$$

Double 20 is equal to

20	

35, twice is equal to

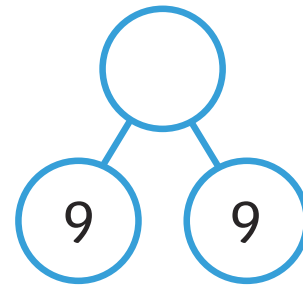
$$\square = \text{double } 50$$

$$15 + 15 = \square$$

Doubles



Fill in the missing numbers.



$$\square + 6 = 12$$

$$2 \times 12 = \square$$

Double 20 is equal to

20	

35, twice is equal to



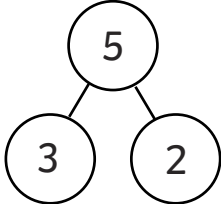
$$\square = \text{double } 50$$

$$15 + 15 = \square$$

Doubles



True or false? Explain how you know.



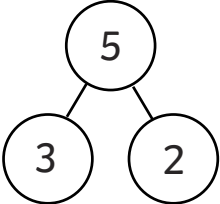
<p>This picture shows double 8.</p> 	<p>This bar model represents a double 10.</p> 
<p>This model shows doubling.</p> 	$2 \times 11 = 11 + 11$
<p>When you double a number, you always get an even number.</p>	<p>Doubling is the same as multiplying by 2.</p>
$2 \times 5 = \text{double } 2$	<p>Double 25 = 2 groups of 25</p>

Write your own true or false statements about doubling and give them to a friend to answer.

Doubles



True or false? Explain how you know.

<p>This picture shows double 8.</p> 	<p>This bar model represents a double 10.</p> 
<p>This model shows doubling.</p> 	$2 \times 11 = 11 + 11$
<p>When you double a number, you always get an even number.</p>	<p>Doubling is the same as multiplying by 2.</p>
$2 \times 5 = \text{double } 2$	<p>Double 25 = 2 groups of 25</p>

Write your own true or false statements about doubling and give them to a friend to answer.

Doubles



Double each number.

10	
20	
30	
40	
50	

What patterns do you notice?

5	
15	
25	
35	
45	

Now, double these numbers.

What patterns do you notice?

How far can you carry on the sequences?

Doubles



Double each number.

10	
20	
30	
40	
50	

What patterns do you notice?

5	
15	
25	
35	
45	

Now, double these numbers.

What patterns do you notice?

How far can you carry on the sequences?