

How Many Fingers?

To recall and use multiplication facts for the 5 times table.



Instructions

1. Fill in the missing information in the multiplication sentences.
2. Cut out the hands and the multiplication sentences.
3. Work with a friend to match the hands to a sentence.
4. Take it in turns to turn a sentence face down. Can your friend guess what the sentence says by looking at the hands?

$1 \times 5 = 5$	$2 \times 5 = \underline{\quad}$	$3 \times 5 = \underline{\quad}$
$4 \times 5 = \underline{\quad}$	$5 \times 5 = \underline{\quad}$	$\underline{\quad} \times 5 = \underline{\quad}$
$\underline{\quad} \times 5 = \underline{\quad}$	$\underline{\quad} \times 5 = \underline{\quad}$	$\underline{\quad} \times 5 = \underline{\quad}$
$\underline{\quad} \times 5 = \underline{\quad}$	$\underline{\quad} \times 5 = \underline{\quad}$	$\underline{\quad} \times 5 = \underline{\quad}$

How Many Fingers?

To recall and use multiplication facts for the 5 times table.



Instructions

1. Fill in the missing information in the multiplication sentences.
2. Cut out the hands and the multiplication sentences.
3. Work with a friend to match the hands to a sentence.
4. Take it in turns to turn a sentence face down. Can your friend guess what the sentence says by looking at the hands?

$1 \times 5 = \underline{\quad}$	$2 \times 5 = \underline{\quad}$	$3 \times 5 = \underline{\quad}$
$4 \times 5 = \underline{\quad}$	$5 \times 5 = \underline{\quad}$	$\underline{\quad} \times 5 = \underline{\quad}$
$\underline{\quad} \times \underline{\quad} = \underline{\quad}$	$\underline{\quad} \times \underline{\quad} = \underline{\quad}$	$\underline{\quad} \times \underline{\quad} = \underline{\quad}$
$\underline{\quad} \times \underline{\quad} = \underline{\quad}$	$\underline{\quad} \times \underline{\quad} = \underline{\quad}$	$\underline{\quad} \times \underline{\quad} = \underline{\quad}$

How Many Fingers?

To recall and use multiplication facts for the 5 times table.




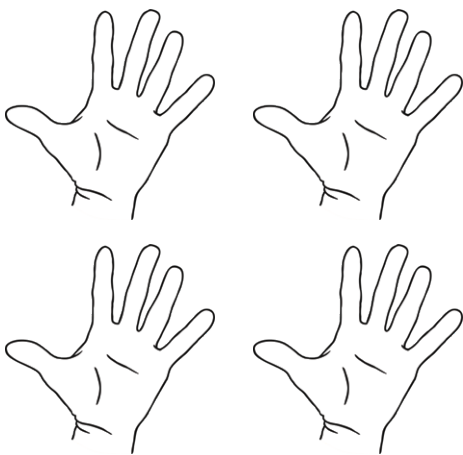
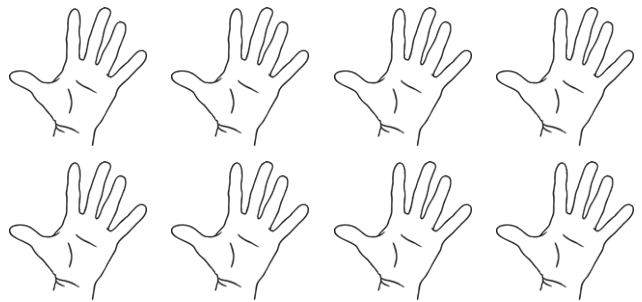
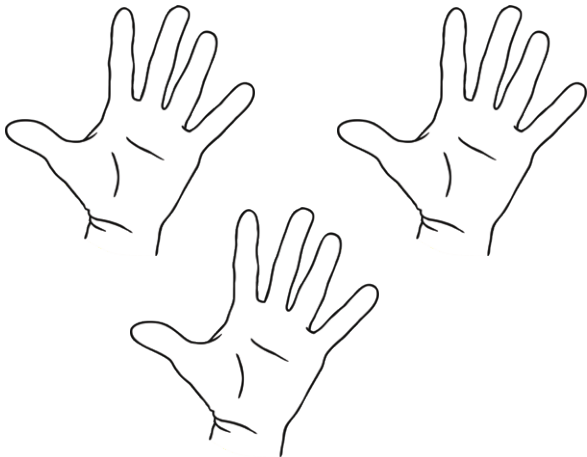

Instructions

1. Fill in the missing information in the multiplication sentences.
2. Cut out the hands and the multiplication sentences.
3. Work with a friend to match the hands to a sentence.
4. Take it in turns to turn a sentence face down. Can your friend guess what the sentence says by looking at the hands?

$1 \times 5 = \underline{\quad}$	$2 \times 5 = \underline{\quad}$	$3 \times 5 = \underline{\quad}$
$\underline{\quad} \times \underline{\quad} = \underline{\quad}$	$\underline{\quad} \times \underline{\quad} = \underline{\quad}$	$\underline{\quad} \times \underline{\quad} = \underline{\quad}$
$\underline{\quad} \times \underline{\quad} = \underline{\quad}$	$\underline{\quad} \times \underline{\quad} = \underline{\quad}$	$\underline{\quad} \times \underline{\quad} = \underline{\quad}$
$\underline{\quad} \times \underline{\quad} = \underline{\quad} \times 5 - 5$	$\underline{\quad} \times \underline{\quad} = \underline{\quad} \times 5 + 5$	$\underline{\quad} \times \underline{\quad} = \underline{\quad} \times 5 - 5$

How Many Fingers?

To recall and use multiplication facts for the 5 times table.



How Many Fingers?

To recall and use multiplication facts for the 5 times table.



