

Varied Fluency

Step 4: Time to the Half Hour

National Curriculum Objectives:

Mathematics Year 1: (1M4a) [Tell the time to the hour and half past the hour and draw the hands on a clock face to show these times](#)

Differentiation:

Developing Questions to support telling the time to the half hour. Hours written in number form.

Expected Questions to support telling the time to the half hour. Hours written in number and word form.

Greater Depth Questions to support telling the time to the half hour. Hours written in word form and some digits missing from all clock faces.


More [Year 1 Time](#) resources.

Did you like this resource? Don't forget to [review](#) it on our website.

Time to the Half Hour

Time to the Half Hour

1a. What time does the clock show?




Half past 2

Half past 5



VF

1b. What time does the clock show?




Half past 6

Half past 9




VF

2a. True or false? The clock shows half past 11.



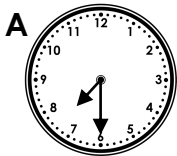
VF

2b. True or false? The clock shows half past 4?

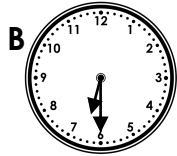


VF

3a. Draw a line to match each clock to the correct written time.



Half past 6

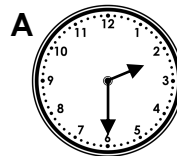


Half past 7

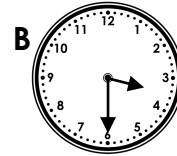


VF

3b. Draw a line to match each clock to the correct written time.



Half past 2




Half past 3




VF

4a. Draw the minute hand on the clock face to show the time, half past 5.



VF

4b. Draw the hour hand on the clock face to show the time, half past 8.




VF

Time to the Half Hour

Time to the Half Hour

5a. What time does the clock show?



Half past three


Half past 4

Half past six



VF

5b. What time does the clock show?



Half past 2


Half past three

Half past 1




VF

6a. True or false? The clock shows half past ten.



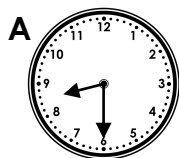
VF

6b. True or false? The clock shows half past 7.



VF

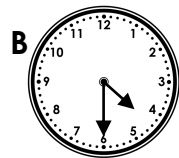
7a. Draw a line to match the clocks to the correct written time.



Half past 4

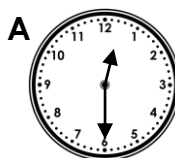
Half past 5

Half past 8



VF

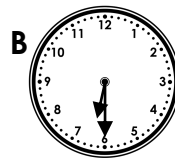
7b. Draw a line to match the clocks to the correct written time.



Half past six


Half past one

Half past twelve




VF

8a. Draw the hour hand and minute hand on the clock face to show the time half past 2.



VF

8b. Draw the hour hand and minute hand on the clock face to show the time half past 12.




VF

Time to the Half Hour

Time to the Half Hour

9a. What time does the clock show?



Half past ten


Half past six

Half past nine



VF

9b. What time does the clock show?



Half past five


Half past six

Half past seven




VF

10a. True or false? The clock shows half past four.



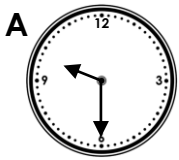
VF

10b. True or false? The clock shows half past eight.



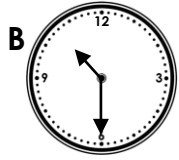
VF

11a. Draw a line to match the clocks to the correct written time.



Half past nine

Half past ten

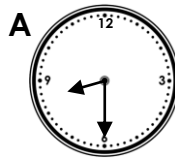


Half past eight



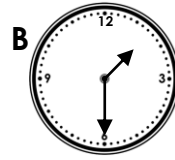
VF

11b. Draw a line to match the clocks to the correct written time.



Half past eight

Half past nine

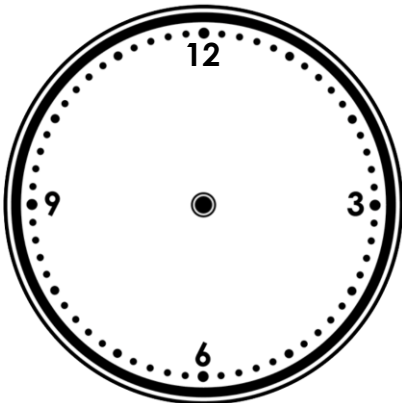


Half past one



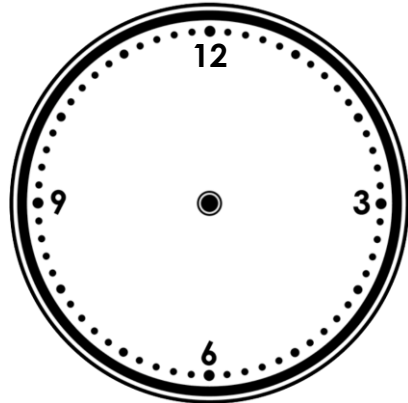
VF

12a. Draw the hour hand and minute hand on the clock face to show the time half past four.



VF

12b. Draw the hour hand and minute hand on the clock face to show the time half past six.



VF

Varied Fluency Time to the Half Hour

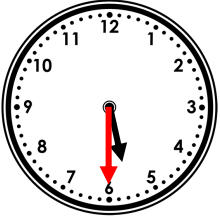
Developing

1a. **The clock shows half past 2.**

2a. **True**

3a. **A. Half past 7 B. Half past 6**

4a.



Expected

5a. **The clock shows half past 3.**

6a. **False. The clock shows half past 9.**

7a. **A. Half past 8 B. Half past 4**

8a.



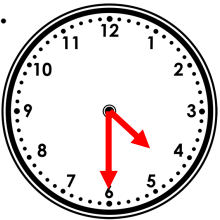
Greater Depth

9a. **The clock shows half past nine.**

10a. **True.**

11a. **A. Half past nine B. Half past 10**

12a.



Varied Fluency Time to the Half Hour

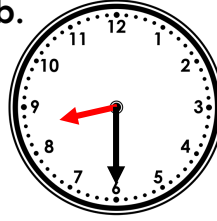
Developing

1b. **The clock shows half past 9.**

2b. **False. The clock shows half past 3.**

3b. **A. Half past 2 B. Half past 3**

4b.



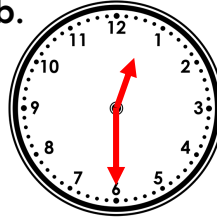
Expected

5b. **The clock shows half past 1.**

6b. **True.**

7b. **A. Half past 12 B. Half past 6**

8b.



Greater Depth

9b. **The clock shows half past five.**

10b. **False. The clock shows half past seven.**

11b. **A. Half past eight B. Half past one.**

12b.

