


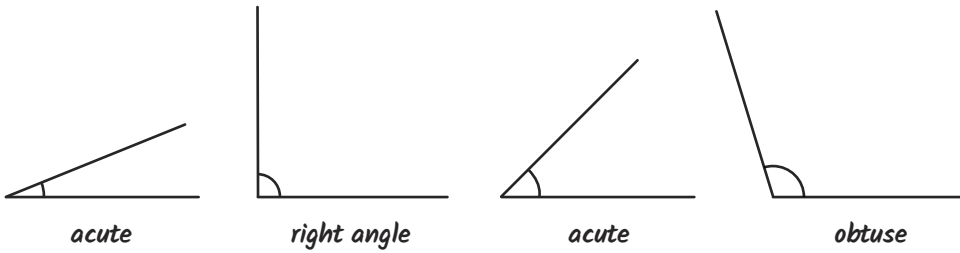


1) Complete these sentences:


An angle less than a right angle is called an *acute* angle.

An angle greater than a right angle, but less than 180°, is called an *obtuse* angle.

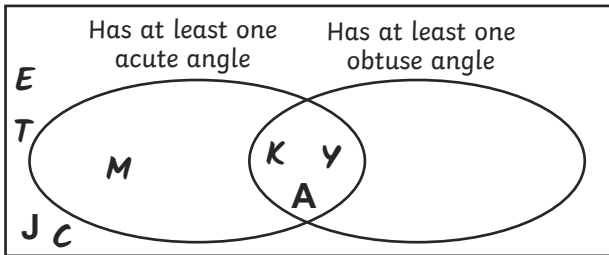
2) Label each of these angles as obtuse, acute or a right angle. Draw your own angle in the empty box and label it:



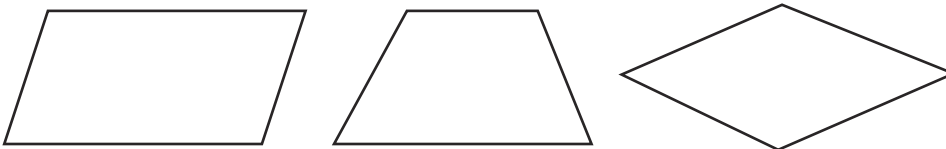
1)



2)



1) *Multiple answers possible, such as:*



2) *Carla. Angles are formed where straight lines meet so this shape only has two angles.*

