




Shape and Space

How many lines of symmetry does the square have?

Q1



lines of
symmetry

How many lines of symmetry does the rectangle have?

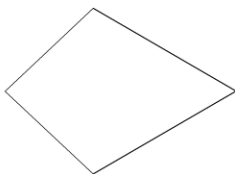
Q2



lines of
symmetry

How many lines of symmetry does the shape have?

Q3



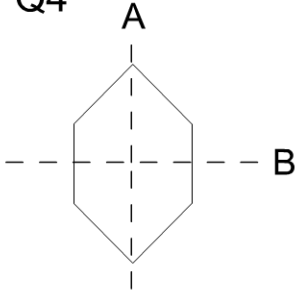
lines of
symmetry



Shape and Space

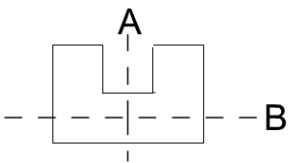
Look at the shapes below.
Which of these lines are lines of symmetry?
Underline the correct answers.

Q4



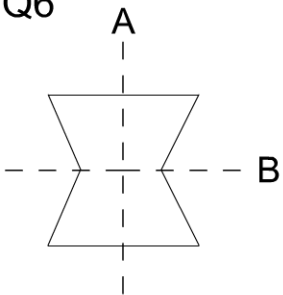
- a. Line A only
- b. Line B only
- c. Both lines A and B
- d. Neither

Q5



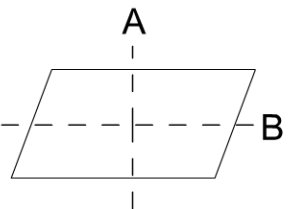
- a. Line A only
- b. Line B only
- c. Both lines A and B
- d. Neither

Q6



- a. Line A only
- b. Line B only
- c. Both lines A and B
- d. Neither

Q7



- a. Line A only
- b. Line B only
- c. Both lines A and B
- d. Neither