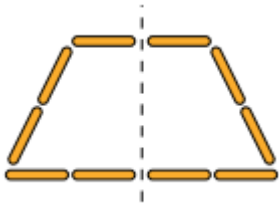
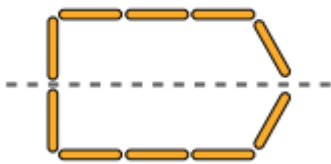


## Answers

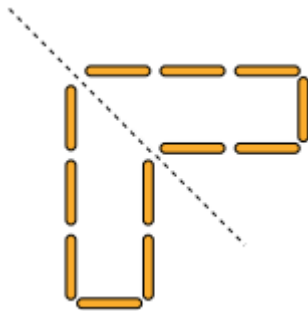
1 a):



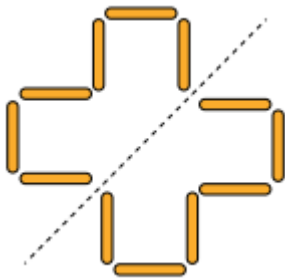
1 b):



2 a):



3 b):



3 : 1. True – you can draw a right angled trapezium, for example.

2. False – it will depend where the line of symmetry is.

3. False – it will depend where the line of symmetry is.