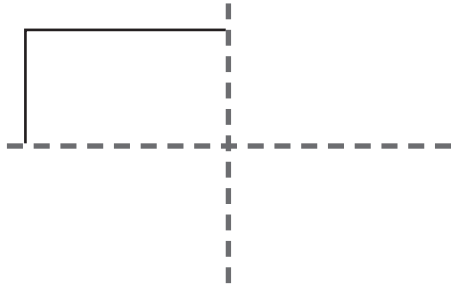


Completing a symmetric shape

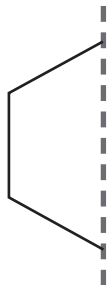
I Complete the symmetric shapes. Name each shape once you have drawn it.

a)



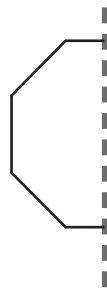
Name of shape: _____

b)



Name of shape: _____

c)



Name of shape: _____

d)



Name of shape: _____