

1 Complete the calculations.

Use bar models to help you.

a) $\frac{1}{2} + \frac{7}{10} = \square = \square$

b) $\frac{1}{2} + \frac{3}{10} + \frac{1}{5} = \square = \square$

c) $\frac{2}{3} + \frac{5}{6} + \frac{1}{12} = \square = \square$

2 Complete the additions.

a) $\frac{4}{5} + \frac{7}{20} = \square = \square$

b) $\frac{5}{4} + \frac{7}{20} = \square = \square$

c) $\frac{3}{4} + \frac{5}{12} = \square = \square$

d) $\frac{4}{3} + \frac{5}{12} = \square = \square$

e) $\frac{3}{5} + \frac{11}{15} = \square = \square$

f) $\frac{5}{3} + \frac{11}{15} = \square = \square$



3 Match the additions that have the same answer.

$\frac{3}{5} + \frac{9}{20}$

$\frac{16}{20} + \frac{9}{20}$

$\frac{3}{4} + \frac{9}{20}$

$\frac{12}{20} + \frac{9}{20}$

$\frac{4}{5} + \frac{9}{20}$


$\frac{14}{20} + \frac{9}{20}$

$\frac{7}{10} + \frac{9}{20}$

$\frac{15}{20} + \frac{9}{20}$

4 Dexter has some tins of food. There are four types of food: beans, sweetcorn, soup and tomatoes.

- The total weight of all the tins is 2 kg.
- The tins of beans weigh $\frac{2}{3}$ kg.
- The tins of sweetcorn weigh $\frac{5}{12}$ kg.
- The tins of soup weigh $\frac{1}{4}$ kg.



- Work out the total weight of the tins of beans, sweetcorn and soup.
- How much do the tins of tomatoes weigh?



3 Match the additions that have the same answer.

$$\frac{3}{5} + \frac{9}{20}$$

$$\frac{16}{20} + \frac{9}{20}$$

$$\frac{3}{4} + \frac{9}{20}$$

$$\frac{12}{20} + \frac{9}{20}$$

$$\frac{4}{5} + \frac{9}{20}$$

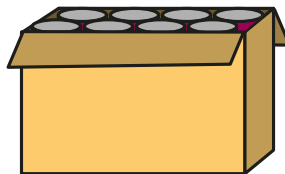
$$\frac{14}{20} + \frac{9}{20}$$

$$\frac{7}{10} + \frac{9}{20}$$

$$\frac{15}{20} + \frac{9}{20}$$

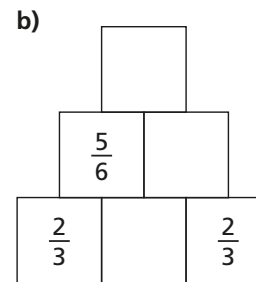
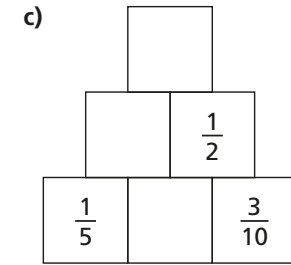
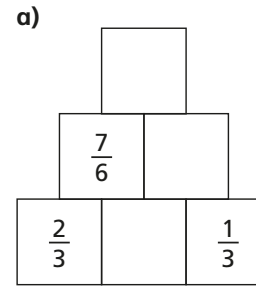
4 Dexter has some tins of food. There are four types of food: beans, sweetcorn, soup and tomatoes.

- The total weight of all the tins is 2 kg.
- The tins of beans weigh $\frac{2}{3}$ kg.
- The tins of sweetcorn weigh $\frac{5}{12}$ kg.
- The tins of soup weigh $\frac{1}{4}$ kg.



- Work out the total weight of the tins of beans, sweetcorn and soup.
- How much do the tins of tomatoes weigh?

5 Complete the addition pyramids.



6 What could the three missing numerators be?

$$\frac{\square}{4} + \frac{\square}{12} + \frac{\square}{3} = \frac{13}{12}$$

Give three different possibilities.

