

Flashback 4

Year 3 | Week 9 | Day 4

5×7

- 1) 12 cookies are shared into 3 equal groups.
How many cookies are in each group?
- 2) Subtract 284 from 916
- 3) What is 55 more than 870?
- 4) How many days are in 2 weeks?



Flashback 4

Year 3 | Week 9 | Day 4

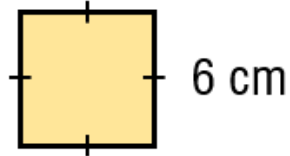
5×7

- 1) 12 cookies are shared into 3 equal groups.
How many cookies are in each group?
- 2) Subtract 284 from 916
- 3) What is 55 more than 870?
- 4) How many days are in 2 weeks?



3×3

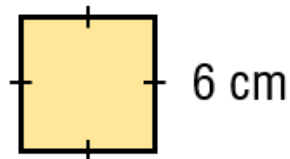
- 1) Calculate the perimeter of the square.



- 2) How many metres are there in 5 kilometres?
- 3) Subtract 450 from 3,000
- 4) How many sides does a hexagon have?

 3×3

- 1) Calculate the perimeter of the square.



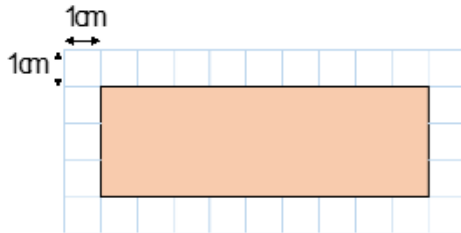
- 2) How many metres are there in 5 kilometres?
- 3) Subtract 450 from 3,000
- 4) How many sides does a hexagon have?

Flashback 4

Year 4 | Week 9 | Day 2

$$4 \times 12$$

- 1) Multiply 72 by 10
- 2) Calculate the perimeter of the rectangle.



- 3) Find the difference between 2,800 and 1,300
- 4) Calculate one third of 18

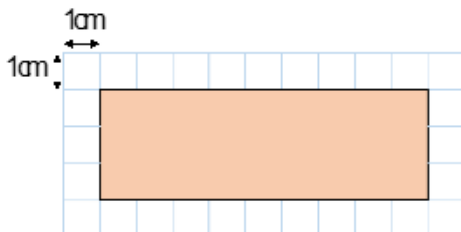


Flashback 4

Year 4 | Week 9 | Day 2

$$4 \times 12$$

- 1) Multiply 72 by 10
- 2) Calculate the perimeter of the rectangle.



- 3) Find the difference between 2,800 and 1,300
- 4) Calculate one third of 18



12×2

- 1) Calculate 3×6
- 2) Estimate $305 + 448$
- 3) Add 254 and 37 together.
- 4) How many sides does a pentagon have?

12×2

- 1) Calculate 3×6
- 2) Estimate $305 + 448$
- 3) Add 254 and 37 together.
- 4) How many sides does a pentagon have?