


Multiply and divide by 6

1 Complete the sentences.



There are boxes.

There are eggs in each box.


There are eggs altogether.



There are spiders.

There are legs on each spider.

There are legs altogether.




There are boxes.

There are eggs in each box.

There are eggs altogether.

2 a) Rosie has 30 strawberries.




She shares them equally between 6 bowls.

a) Draw on the picture to show how Rosie shares the strawberries.

b) How many strawberries does Rosie put in each bowl?


Rosie puts strawberries in each bowl.

3 These apples are being put into bags of 6



How many bags are needed?

- 4 Complete the number sentences to describe the array.



$$\boxed{9} \times 6 = \boxed{54}$$

$$\boxed{6} \times \boxed{9} = \boxed{54}$$

$$\boxed{54} \div 6 = \boxed{9}$$

$$\boxed{54} \div \boxed{9} = \boxed{6}$$

- 5 A red ribbon is 6 cm long.
A yellow ribbon is 7 times as long as the red ribbon.
How long is the yellow ribbon?

The yellow ribbon is $\boxed{42}$ cm long.



- 6 There are 66 children sitting in rows.
There are 6 children in each row.
How many rows are there?


$\boxed{11}$

- 7 Nails come in boxes of 100
A crate holds 6 boxes.
A shop orders 4,800 nails.
How many **crates** does the shop order?



$\boxed{8}$

- 8 Teddy has an odd number of counters.



Do you agree with Teddy? No

Why?

All numbers in the 6 times-table are even.