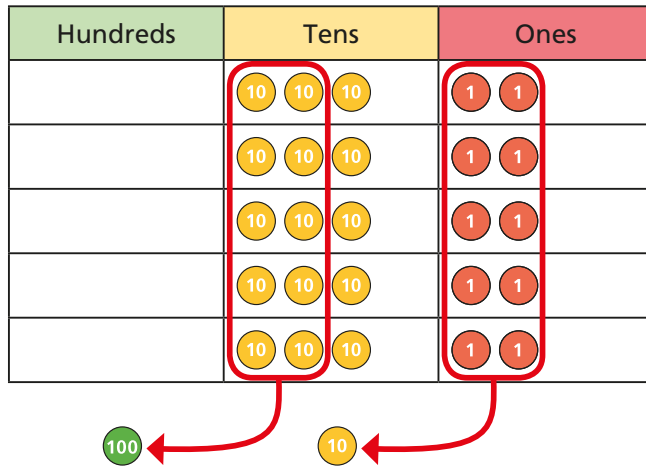


1 Brett uses a place value chart to work out 5×32



Talk about Brett's method with a partner.

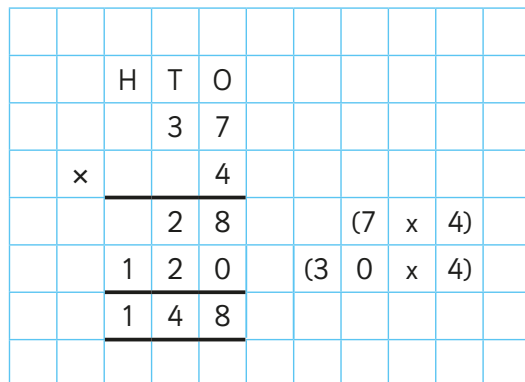
Work out the multiplication.

$$5 \times 32$$

Use Brett's method to work out 6×34



2 Rosie works out 4×37 using a written method.

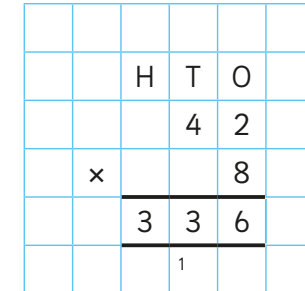


Talk about Rosie's method with a partner.

Use Rosie's method to work out 6×28



3 Dani uses a different written method to work out 8×42



Talk about Dani's method with a partner.

Use Dani's method to work out 3×27



4 Use a written method to complete the multiplications.

a) $38 \times 6 =$

d) $52 \times 5 =$

b) $71 \times 3 =$

e) $29 \times 8 =$

c) $45 \times 9 =$

f) $17 \times 4 =$

5 Class 4 is selling tickets for a play.

Tickets cost £5 per person.

56 tickets have been sold so far.

How much money has Class 4 collected?

6 Rosie buys 8 bunches of flowers. Each bunch has 17 flowers.

How many flowers does she have altogether?