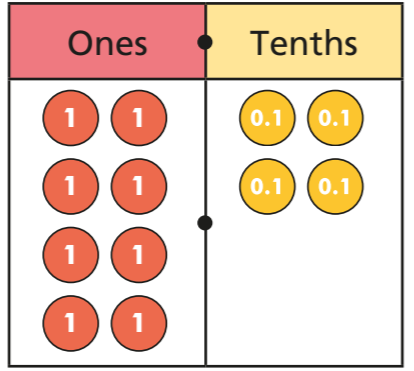


Divide decimals by integers

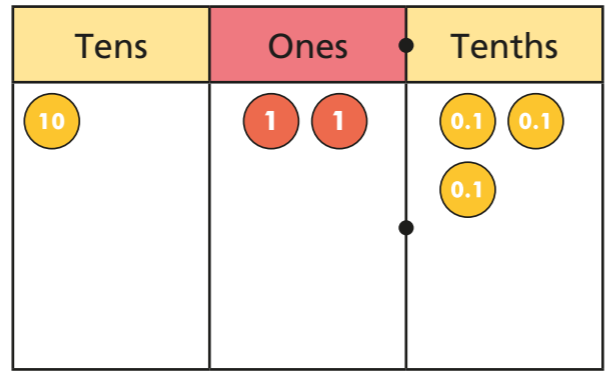


1 Use place value counters to work out the divisions.

a) $8.4 \div 4 = \boxed{2.1}$

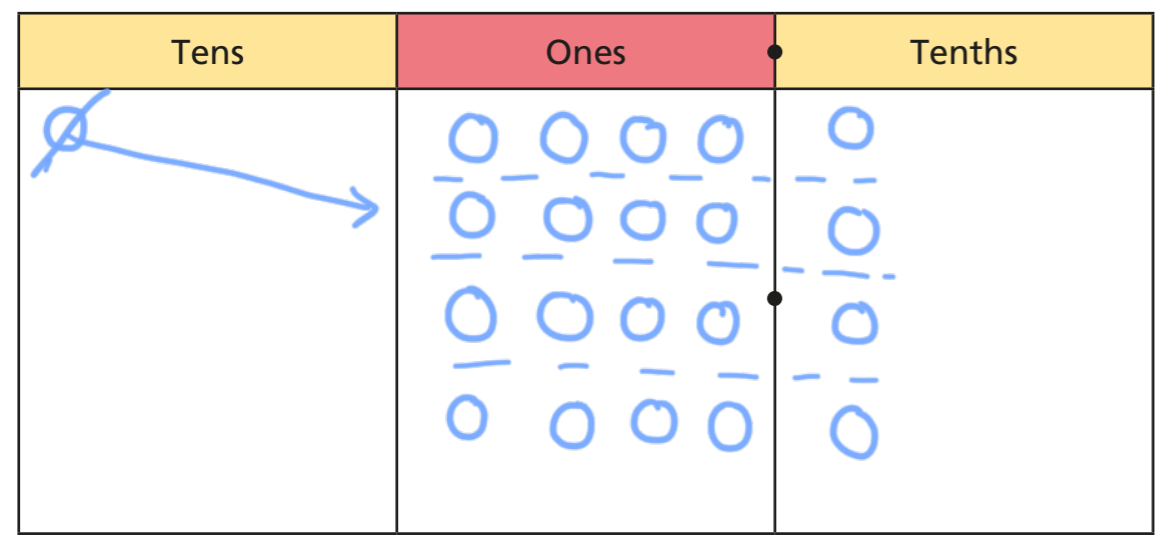


b) $12.3 \div 3 = \boxed{4.1}$

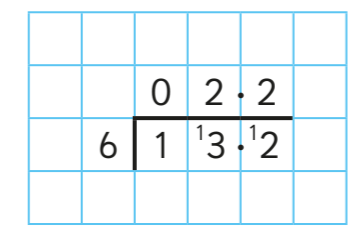


2 Work out the division. Draw your answer.

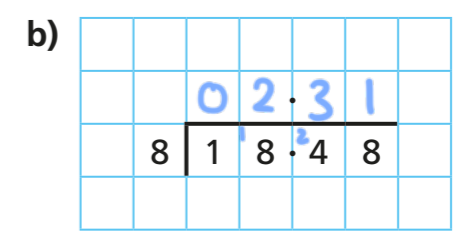
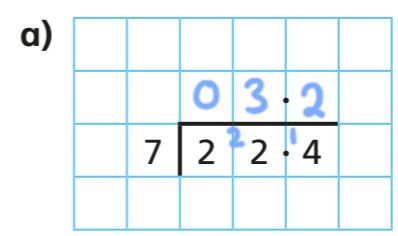
$16.4 \div 4 = \boxed{4.1}$



3 Brett uses short division to work out $13.2 \div 6$



Use short division to work out the calculations.



4 Work out the divisions.

a) $25.6 \div 8 = \boxed{3.2}$

d) $\boxed{3.89} = 19.45 \div 5$

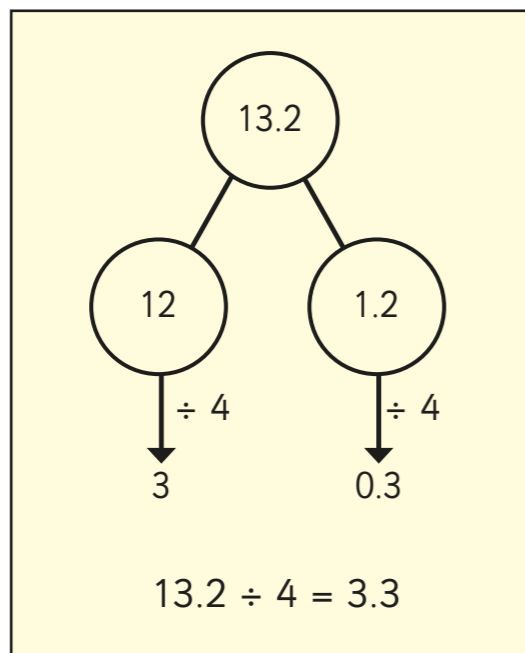
b) $14.8 \div 4 = \boxed{3.7}$

e) $202.35 \div 3 = \boxed{67.45}$

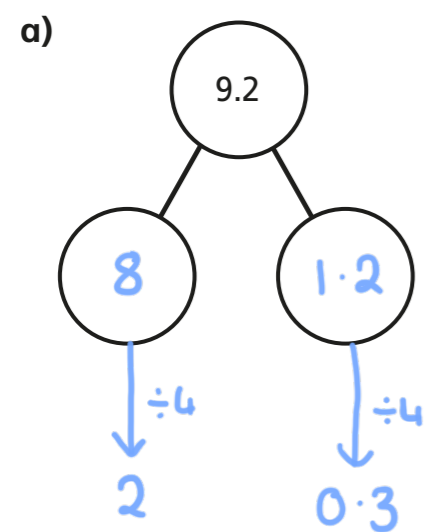
c) $18.48 \div 6 = \boxed{3.08}$

f) $105.12 \div 9 = \boxed{11.68}$

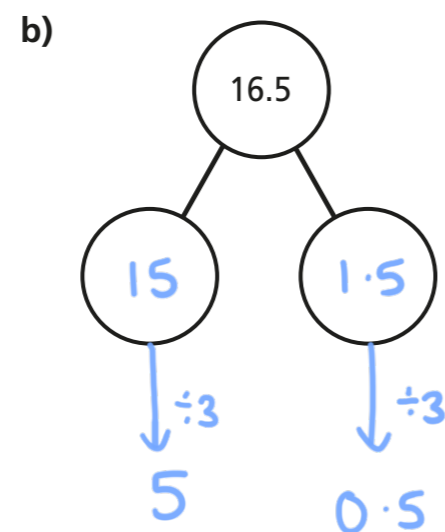
- 5 Esther solves $13.2 \div 4$ by partitioning 13.2 into two numbers that are easier to divide.



Use Esther's method to complete the part-whole model and calculation.



$$9.2 \div 4 = \boxed{2.3}$$



$$16.5 \div 3 = \boxed{5.5}$$

Compare answers with a partner. Did you partition your numbers in the same way?

- 6 Work out the divisions.

a) $9.64 \div 4 = \boxed{2.41}$

$$96.4 \div 4 = \boxed{24.1}$$

$$0.964 \div 4 = \boxed{0.241}$$

$$9.64 \div 8 = \boxed{1.205}$$

b) $19.44 \div 9 = \boxed{2.16}$

$$19.53 \div 9 = \boxed{2.17}$$

$$19.62 \div 9 = \boxed{2.18}$$

- 7 Fill in the missing numbers.

$$3.6 \div 4 = 36 \div \boxed{40}$$

$$3.6 \div 4 = \boxed{7.2} \div 8$$

- 8 Complete the calculation.

e.g. $8.4 \div \boxed{2} = 4.2 \div \boxed{1}$

How many different solutions can you find?

What patterns do you notice? Talk about it with a partner.

