


Introduction

Compare the calculations using $>$, $<$ or $=$.

	4	3	2
x		1	7
<hr/>			
<hr/>			
<hr/>			



	6	1	3
x		1	2
<hr/>			
<hr/>			
<hr/>			

Introduction

Compare the calculations using $>$, $<$ or $=$.

	4	3	2
x		1	7
3	0 ₂	2 ₁	4
4	3	2	0
7	3	4	4

$<$

	6	1	3
x		1	2
1	2	2	6
6	1	3	0
7	3	5	6

Varied Fluency 1

Solve the calculation using a formal multiplication method.

		5	1	1	3
x				2	7
<hr/>					
<hr/>					
<hr/>					
<hr/>					

Varied Fluency 1

Solve the calculation using a formal multiplication method.

		5	1	1	3
x				2	7
	3	5	7	9 2	1
1	0	2	2	6	0
1	3	8	0	5	1
		1	1		

Varied Fluency 2

Match the calculations to the correct answers.

$$3,611 \times 13$$

$$96,596$$

$$3,116 \times 31$$

$$66,381$$

$$3,616 \times 12$$

$$43,392$$

$$3,161 \times 21$$

$$46,943$$

Varied Fluency 2

Match the calculations to the correct answers.

$3,611 \times 13$

96,596

$3,116 \times 31$

66,381

$3,616 \times 12$

43,392

$3,161 \times 21$

46,943

Varied Fluency 3

True or false?

$$5,113 \times 14 > 3,115 \times 23$$

Varied Fluency 3

True or false?

$$5,113 \times 14 > 3,115 \times 23$$

False, $5,113 \times 14 = 71,582$ and $3,115 \times 23 = 71,645$ so $5,113 \times 14 < 3,115 \times 23$.

NOW COMPLETE THE VARIED FLUENCY ACTIVITY, CHOOSING EITHER DEVELOPING, EXPECTED OR GREATER DEPTH.

Problem Solving 1

Mason is thinking of a number. He gives the following clues:




**It is an odd 5-digit number.
It is the result of multiplying a
4-digit number by 31.
The 4-digit number has a digit
sum of 5.**

What is the smallest number Mason could be thinking of?

Problem Solving 1

Mason is thinking of a number. He gives the following clues:



It is an odd 5-digit number.
It is the result of multiplying a
4-digit number by 31.
The 4-digit number has a digit
sum of 5.

What is the smallest number Mason could be thinking of?

The smallest number Mason could be thinking of is 1,013.

$1,013 \times 51 = 51,663$ so Mason's 5-digit number is 51,663.

Problem Solving 2

Use two of these digit cards to create a multiplication equal to approximately 99,000.

$$4,312 \quad \times \quad \underline{\hspace{2cm}}$$

2

3

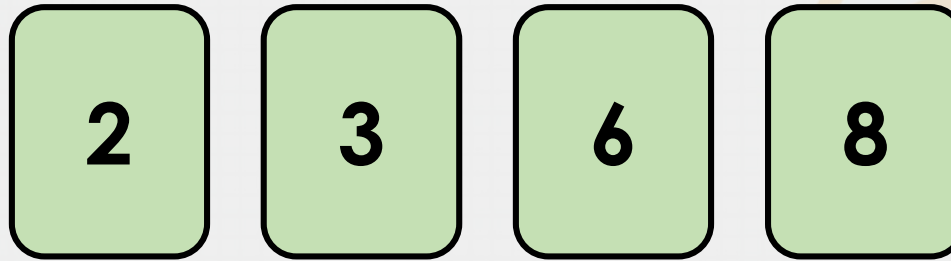
6

8

Problem Solving 2

Use two of these digit cards to create a multiplication equal to approximately 99,000.

$$4,312 \quad \times \quad \underline{\hspace{2cm}}$$




$$4,312 \times 23 = 99,176$$

Reasoning 1

A boat costs £7,015.

12 people buy a boat each. The boat sales person says the total cost is £84,280.




Is he correct? Explain your answer.

Reasoning 1

A boat costs £7,015.

12 people buy a boat each. The boat sales person says the total cost is £84,280.




Is he correct? Explain your answer.

No, he is not correct because...

Reasoning 1

A boat costs £7,015.

12 people buy a boat each. The boat sales person says the total cost is £84,280.



Is he correct? Explain your answer.

No, he is not correct because $£84,280 \times 12 = £84,180$.

**NOW COMPLETE REASONING + PROBLEM SOLVING ACTIVITY,
CHOOSING EITHER DEVELOPING, EXPECTED OR GREATER DEPTH.**



**IF YOU HAVE TIME, COMPLETE THE
HOMEWORK/EXTENSION ACTIVITY,
CHOOSING EITHER DEVELOPING,
EXPECTED OR GREATER DEPTH.**

DON'T FORGET TO MARK YOUR ANSWERS!